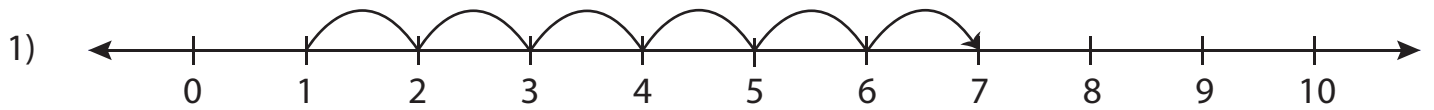


Number Line Addition - MCQ

Sheet 2

Identify the correct addition sentence for each number line.



a) $0 + 6 = 6$

b) $1 + 6 = 7$

c) $2 + 5 = 7$

d) $1 + 7 = 8$



a) $8 + 2 = 10$

d) $8 + 1 = 9$



a) $0 + 2 = 2$

d) $2 + 2 = 4$



a) $7 + 2 = 9$

d) $8 + 1 = 9$

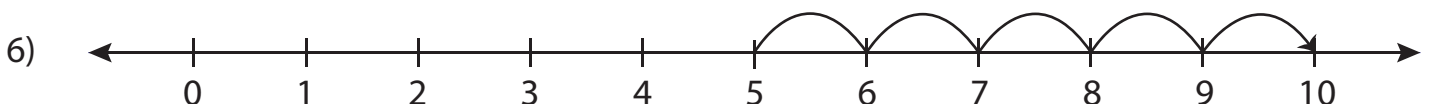


a) $4 + 4 = 8$

b) $2 + 8 = 10$

c) $2 + 6 = 8$

d) $5 + 5 = 10$



a) $5 + 5 = 10$

b) $0 + 10 = 10$

c) $5 + 4 = 9$

d) $0 + 9 = 9$

PREVIEW

Gain complete access to the largest
collection of worksheets in all subjects!

Members, please
log in to
download this
worksheet.

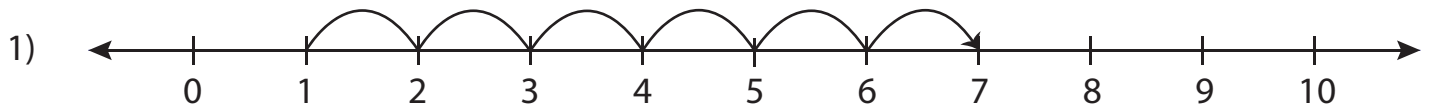
Not a member?
Please sign up to
gain complete
access.

www.mathworksheets4kids.com

Answer key**Number Line Addition - MCQ**

Sheet 2

Identify the correct addition sentence for each number line.



a) $0 + 6 = 6$

b) $1 + 6 = 7$

c) $2 + 5 = 7$

d) $1 + 7 = 8$



a) $8 + 2 = 10$

PREVIEW

d) $8 + 1 = 9$



a) $0 + 2 = 2$

Gain complete access to the largest collection of worksheets in all subjects!

d) $2 + 2 = 4$

Members, please log in to download this worksheet.

Not a member? Please sign up to gain complete access.

www.mathworksheets4kids.com

a) $7 + 2 = 9$

d) $8 + 1 = 9$

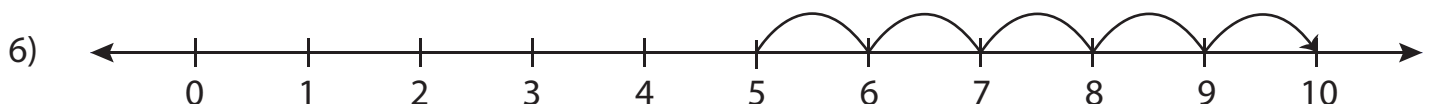


a) $4 + 4 = 8$

b) $2 + 8 = 10$

c) $2 + 6 = 8$

d) $5 + 5 = 10$



a) $5 + 5 = 10$

b) $0 + 10 = 10$

c) $5 + 4 = 9$

d) $0 + 9 = 9$