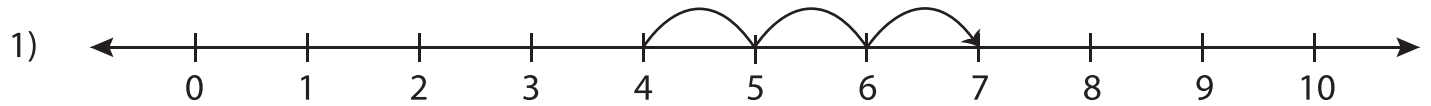


# Number Line Addition - MCQ

Sheet 4

Identify the correct addition sentence for each number line.



a)  $4 + 2 = 6$

b)  $5 + 2 = 7$

c)  $3 + 3 = 6$

d)  $4 + 3 = 7$



a)  $9 + 1 = 10$

d)  $0 + 9 = 9$



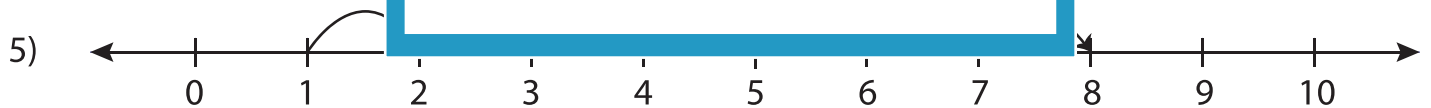
a)  $6 + 2 = 8$

d)  $0 + 4 = 4$



a)  $5 + 4 = 9$

d)  $3 + 4 = 7$

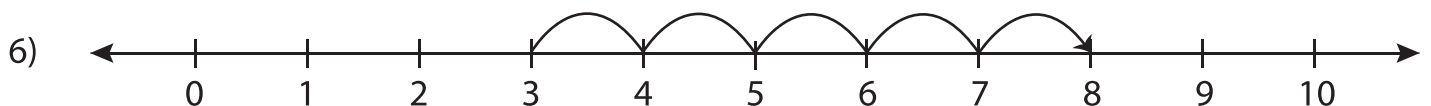


a)  $8 + 1 = 9$

b)  $1 + 7 = 8$

c)  $4 + 4 = 8$

d)  $0 + 8 = 8$



a)  $2 + 4 = 6$

b)  $3 + 6 = 9$

c)  $3 + 5 = 8$

d)  $1 + 5 = 6$

**PREVIEW**

Gain complete access to the largest  
collection of worksheets in all subjects!

Members, please  
log in to  
download this  
worksheet.

Not a member?  
Please sign up to  
gain complete  
access.

[www.mathworksheets4kids.com](http://www.mathworksheets4kids.com)