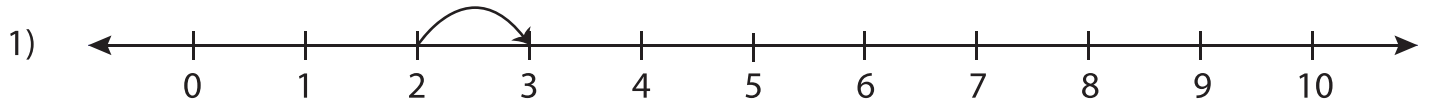


Number Line Addition - MCQ

Sheet 5

Identify the correct addition sentence for each number line.



a) $2 + 3 = 5$

b) $2 + 1 = 3$

c) $0 + 3 = 3$

d) $3 + 1 = 4$



a) $4 + 4 = 8$

d) $3 + 4 = 7$



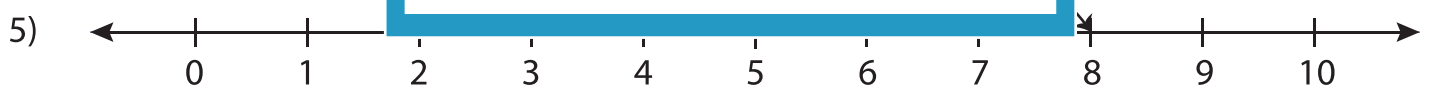
a) $1 + 5 = 6$

d) $0 + 6 = 6$



a) $4 + 2 = 6$

d) $4 + 1 = 5$

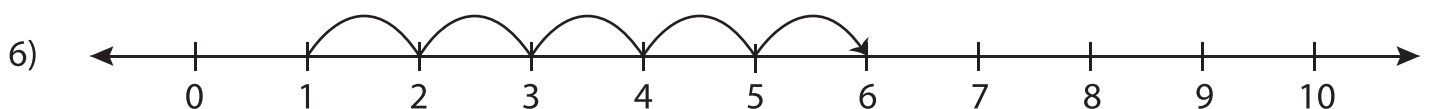


a) $0 + 8 = 8$

b) $7 + 3 = 10$

c) $5 + 4 = 9$

d) $5 + 3 = 8$



a) $1 + 5 = 6$

b) $3 + 5 = 8$

c) $1 + 6 = 7$

d) $4 + 2 = 6$

PREVIEW

Gain complete access to the largest collection of worksheets in all subjects!

Members, please log in to download this worksheet.

Not a member? Please sign up to gain complete access.

www.mathworksheets4kids.com