

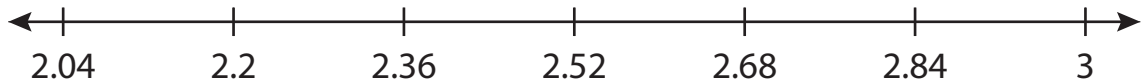
Name : _____

Number Line Addition

Hops-hundredth: S1

Indicate hops on each number line and complete the addition sentences.

1) $2.04 + 0.96 =$ _____



2) $7.65 + 3.5 =$ _____



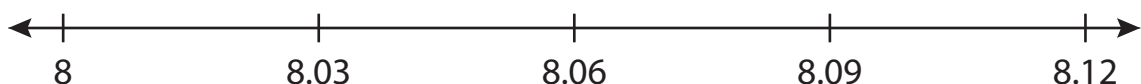
3) $9.66 + 0.6 =$ _____



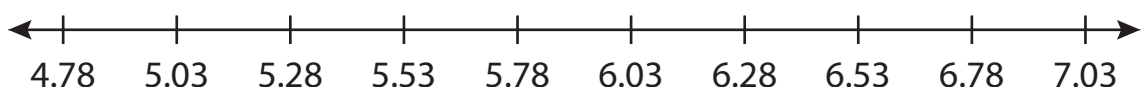
4) $14.46 + 4 =$ _____



5) $8 + 0.6 =$ _____



6) $5.03 + 1.75 =$ _____



PREVIEW

Gain complete access to the largest collection of worksheets in all subjects!

Members, please log in to download this worksheet.

Not a member? Please sign up to gain complete access.

www.mathworksheets4kids.com

Name : _____

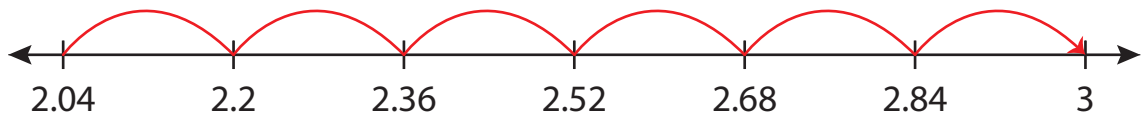
Answer key

Number Line Addition

Hops-hundredth: S1

Indicate hops on each number line and complete the addition sentences.

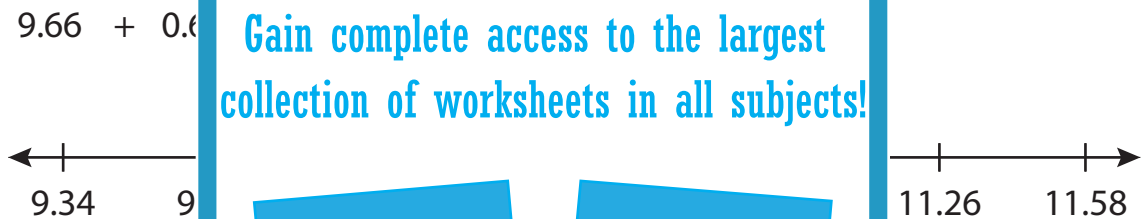
1) $2.04 + 0.96 = \underline{\quad 3 \quad}$



2) $7.65 + 3.5 = \underline{\quad 11.15 \quad}$



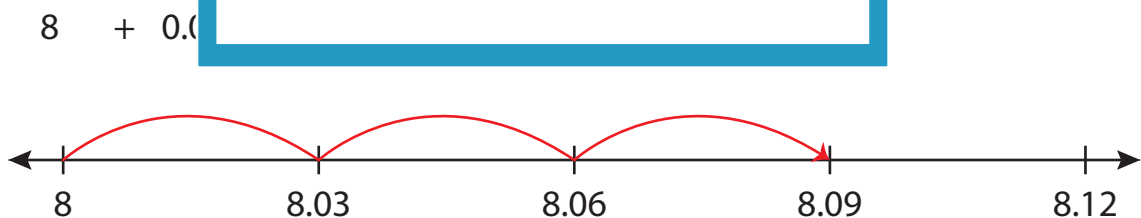
3) $9.66 + 0.6 = \underline{\quad 10.26 \quad}$



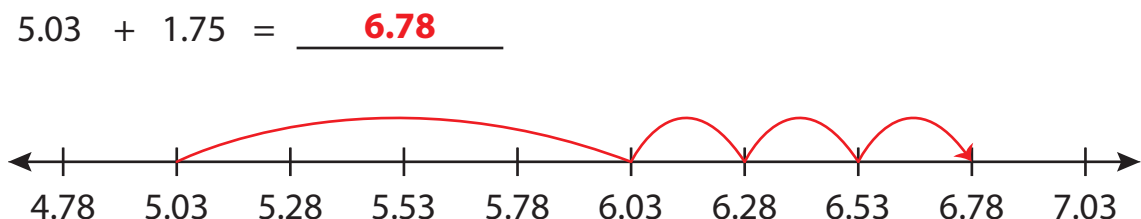
4) $14.46 + 4 = \underline{\quad 18.46 \quad}$



5) $8 + 0.03 = \underline{\quad 8.03 \quad}$



6) $5.03 + 1.75 = \underline{\quad 6.78 \quad}$



PREVIEW

Gain complete access to the largest collection of worksheets in all subjects!

Members, please log in to download this worksheet.

Not a member? Please sign up to gain complete access.

www.mathworksheets4kids.com