

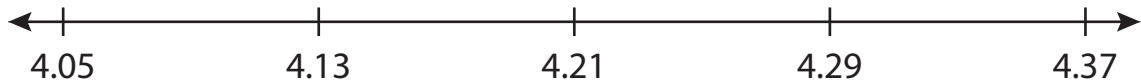
Name : _____

Number Line Addition

Hops-hundredth: S2

Indicate hops on each number line and complete the addition sentences.

1) $4.05 + 0.32 =$ _____



2) $8.13 + 0.87 =$ _____



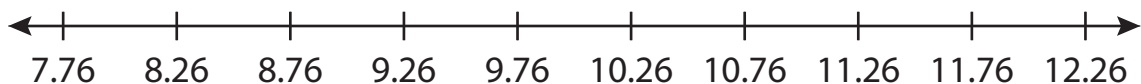
3) $2.81 + 6.09 =$ _____




4) $9.00 + 1.25 =$ _____



5) $9.26 + 3.00 =$ _____



6) $10.88 + 0.66 =$ _____



PREVIEW

Gain complete access to the largest collection of worksheets in all subjects!

Members, please log in to download this worksheet.

Not a member? Please sign up to gain complete access.

www.mathworksheets4kids.com

Name : _____

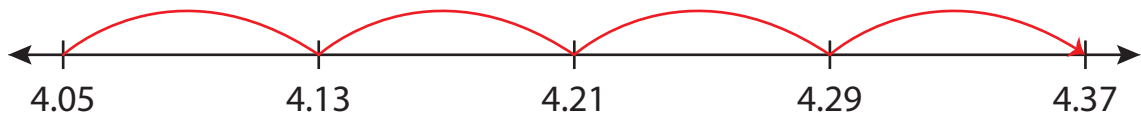
Answer key

Number Line Addition

Hops-hundredth: S2

Indicate hops on each number line and complete the addition sentences.

1) $4.05 + 0.32 = \underline{4.37}$



2) $8.13 + 0.87 =$



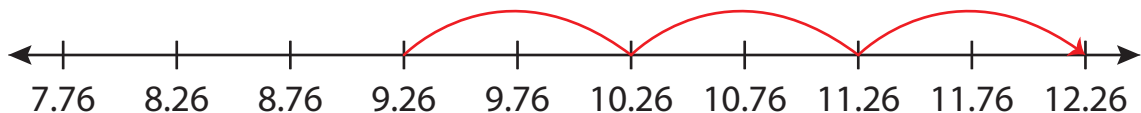
3) $2.81 + 6 =$



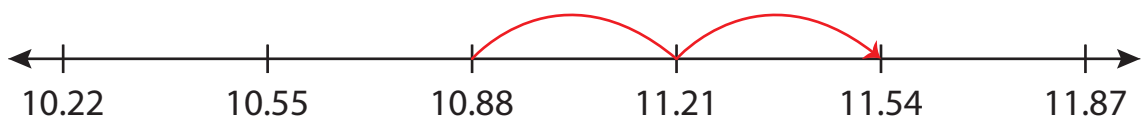
4) $9 + 1.25 =$



5) $9.26 + 3 =$



6) $10.88 + 0.66 = \underline{11.54}$



PREVIEW

Gain complete access to the largest collection of worksheets in all subjects!

Members, please log in to download this worksheet.

Not a member? Please sign up to gain complete access.

www.mathworksheets4kids.com