

Name : _____

Number Line Addition

Hops-hundredth: S3

Indicate hops on each number line and complete the addition sentences.

1) $16.36 + 0.74 =$ _____



2) $9.27 + 0.49 =$ _____



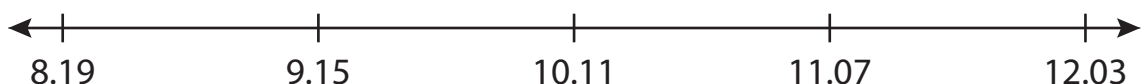
3) $3.36 + 2.25 =$ _____



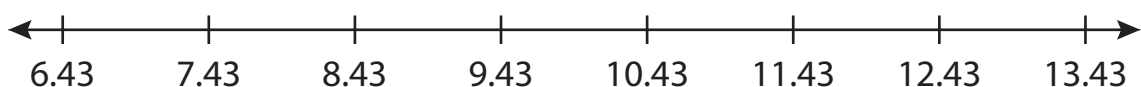
4) $2.02 + 2.50 =$ _____



5) $10.11 + 0.96 =$ _____



6) $7.43 + 5 =$ _____



PREVIEW

Gain complete access to the largest collection of worksheets in all subjects!

Members, please log in to download this worksheet.

Not a member? Please sign up to gain complete access.

www.mathworksheets4kids.com

Name : _____


Answer key

Number Line Addition

Hops-hundredth: S3

Indicate hops on each number line and complete the addition sentences.

1) $16.36 + 0.74 = \underline{17.1}$



2) $9.27 + 0.48 = \underline{9.75}$



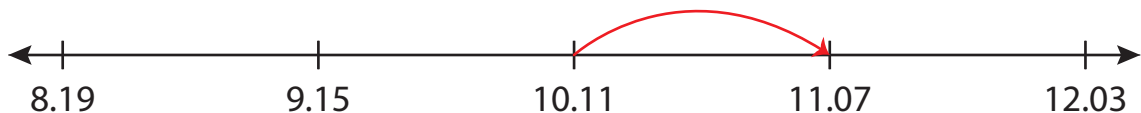
3) $3.36 + 2.25 = \underline{5.61}$



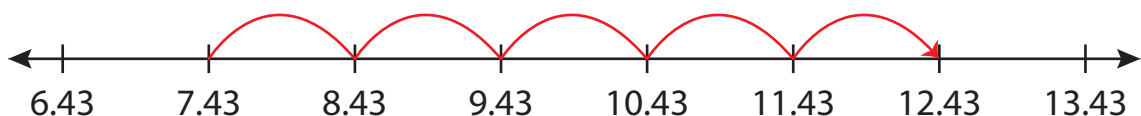
4) $2.02 + 2.50 = \underline{4.52}$



5) $10.11 + 0.96 = \underline{11.07}$



6) $7.43 + 5 = \underline{12.43}$



PREVIEW

Gain complete access to the largest collection of worksheets in all subjects!

Members, please log in to download this worksheet.

Not a member? Please sign up to gain complete access.

www.mathworksheets4kids.com