

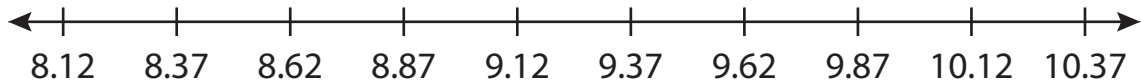
Name : \_\_\_\_\_

# Number Line Addition

Hops-hundredth: S4

Indicate hops on each number line and complete the addition sentences.

1)  $8.37 + 1.25 =$  \_\_\_\_\_



2)  $14 + 0.56 =$  \_\_\_\_\_



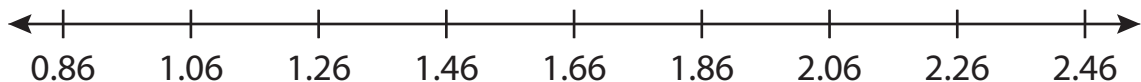
3)  $7.12 + 1.8 =$  \_\_\_\_\_




4)  $11.94 + 3.99 =$  \_\_\_\_\_



5)  $1.06 + 1.2 =$  \_\_\_\_\_



6)  $9.03 + 0.84 =$  \_\_\_\_\_



**PREVIEW**

Gain complete access to the largest collection of worksheets in all subjects!

Members, please log in to download this worksheet.

Not a member? Please sign up to gain complete access.

[www.mathworksheets4kids.com](http://www.mathworksheets4kids.com)

Name : \_\_\_\_\_

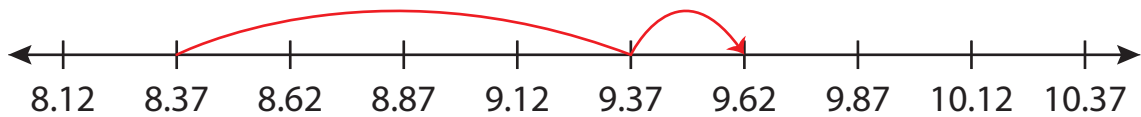
## Answer key

# Number Line Addition

Hops-hundredth: S4

Indicate hops on each number line and complete the addition sentences.

1)  $8.37 + 1.25 = \underline{9.62}$



2)  $14 + 0.56 = \underline{14.56}$



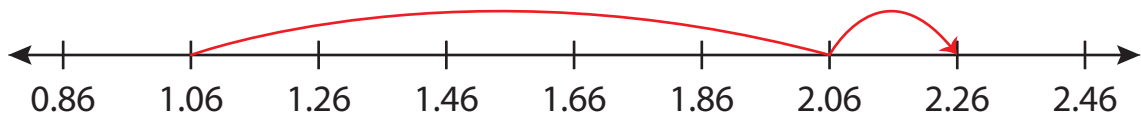
3)  $7.12 + 1.5 = \underline{8.62}$




4)  $11.94 + 3.99 = \underline{15.94}$



5)  $1.06 + 1.20 = \underline{2.26}$



6)  $9.03 + 0.84 = \underline{9.87}$



**PREVIEW**

Gain complete access to the largest collection of worksheets in all subjects!

Members, please log in to download this worksheet.

Not a member? Please sign up to gain complete access.

[www.mathworksheets4kids.com](http://www.mathworksheets4kids.com)