

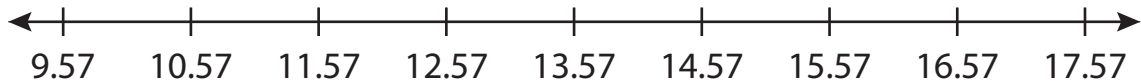
Name : \_\_\_\_\_

# Number Line Addition

Hops-hundredth: S5

Indicate hops on each number line and complete the addition sentences.

1)  $10.57 + 5 =$  \_\_\_\_\_



2)  $3.48 + 1.75 =$  \_\_\_\_\_




3)  $13.13 + 0.9 =$  \_\_\_\_\_



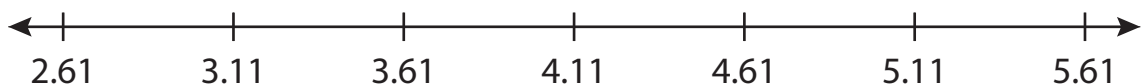
4)  $6.72 + 0.54 =$  \_\_\_\_\_



5)  $4.19 + 0.7 =$  \_\_\_\_\_



6)  $2.61 + 2.5 =$  \_\_\_\_\_



**PREVIEW**

Gain complete access to the largest collection of worksheets in all subjects!

Members, please log in to download this worksheet.

Not a member? Please sign up to gain complete access.

[www.mathworksheets4kids.com](http://www.mathworksheets4kids.com)

Name : \_\_\_\_\_

## Answer key

# Number Line Addition

Hops-hundredth: S5

Indicate hops on each number line and complete the addition sentences.

1)  $10.57 + 5 = \underline{15.57}$



2)  $3.48 + 1.75 = \underline{5.23}$



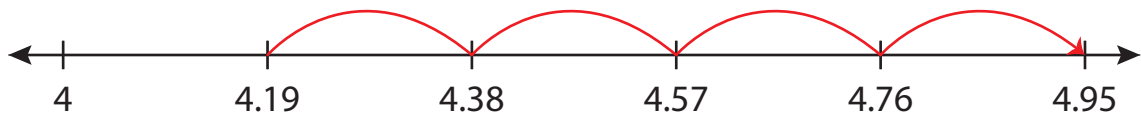
3)  $13.13 + 0.9 = \underline{14.03}$



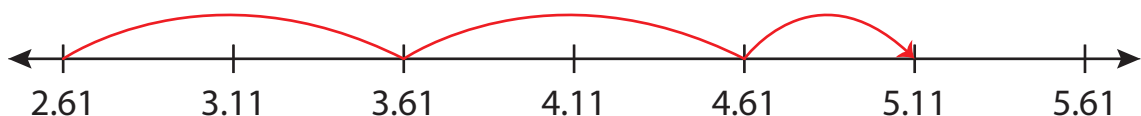
4)  $6.72 + 0.54 = \underline{7.26}$



5)  $4.19 + 0.7 = \underline{4.89}$



6)  $2.61 + 2.5 = \underline{5.11}$



**PREVIEW**

Gain complete access to the largest collection of worksheets in all subjects!

Members, please log in to download this worksheet.

Not a member? Please sign up to gain complete access.

[www.mathworksheets4kids.com](http://www.mathworksheets4kids.com)