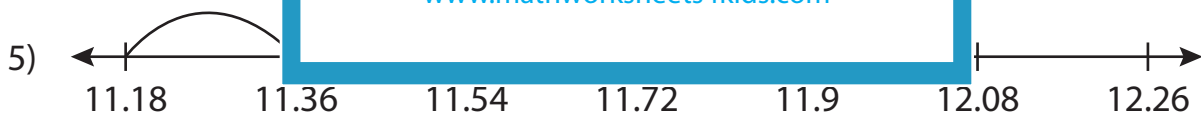
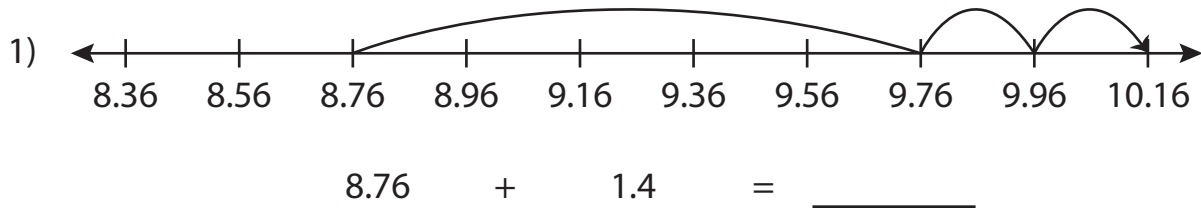


Name : _____

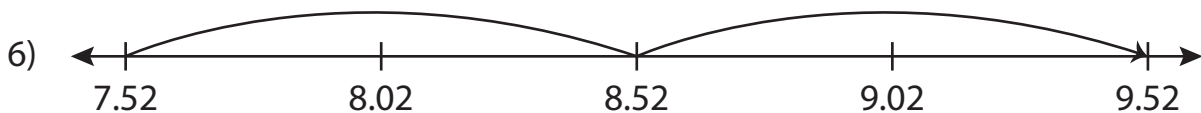
Addition Sentence - Missing Numbers

Hundredth: S2

Complete the addition sentence that describes each model.



$\underline{\hspace{2cm}} + 0.72 = 11.9$



$7.52 + \underline{\hspace{2cm}} = 9.52$

PREVIEW

Gain complete access to the largest collection of worksheets in all subjects!

Members, please log in to download this worksheet.

Not a member? Please sign up to gain complete access.

www.mathworksheets4kids.com

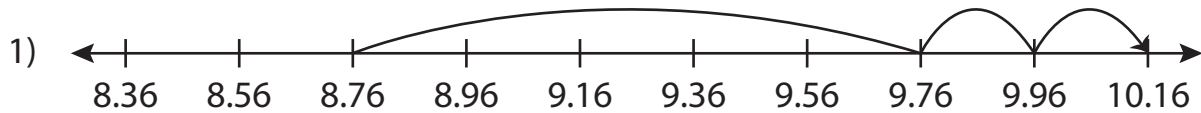
Name : _____

Answer key

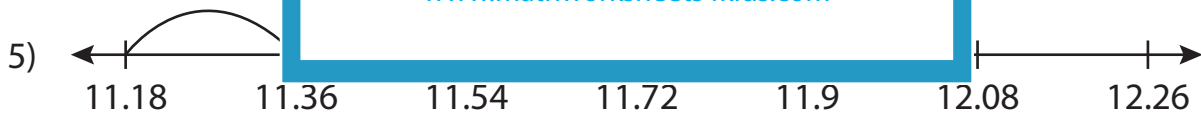
Addition Sentence - Missing Numbers

Hundredth: S2

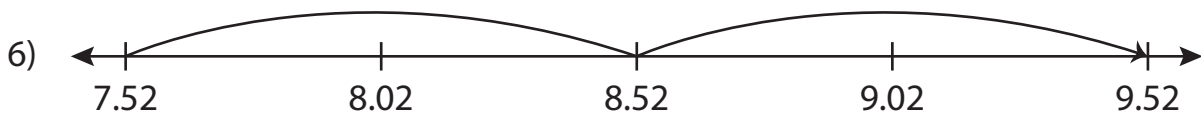
Complete the addition sentence that describes each model.



$$8.76 + 1.4 = \underline{10.16}$$



$$\underline{11.18} + 0.72 = 11.9$$



$$7.52 + \underline{2} = 9.52$$

PREVIEW

Gain complete access to the largest collection of worksheets in all subjects!

Members, please log in to download this worksheet.

Not a member? Please sign up to gain complete access.

www.mathworksheets4kids.com