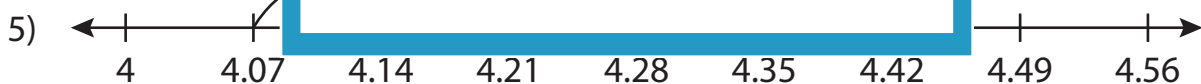



Name : _____

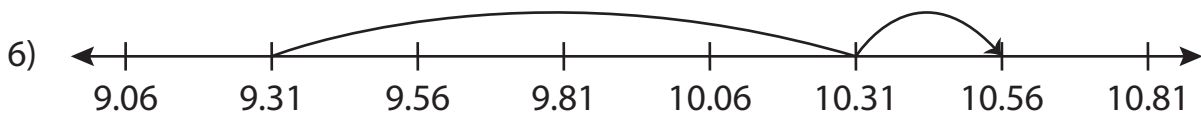
Addition Sentence - Missing Numbers

Hundredth: S3

Complete the addition sentence that describes each model.



4.07 + _____ = 4.42



9.31 + 1.25 = _____

PREVIEW

Gain complete access to the largest collection of worksheets in all subjects!

Members, please log in to download this worksheet.

Not a member? Please sign up to gain complete access.

www.mathworksheets4kids.com

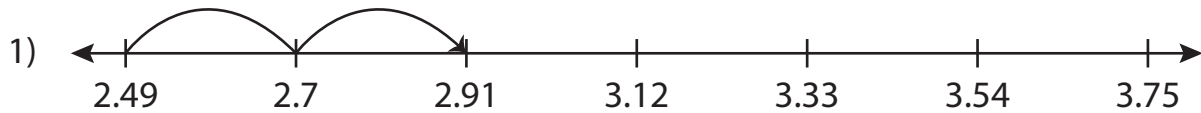
Name : _____

Answer key

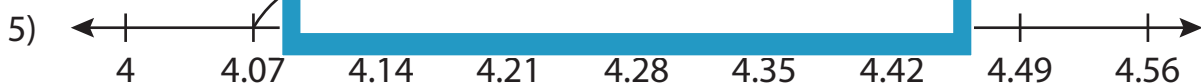
Addition Sentence - Missing Numbers

Hundredth: S3

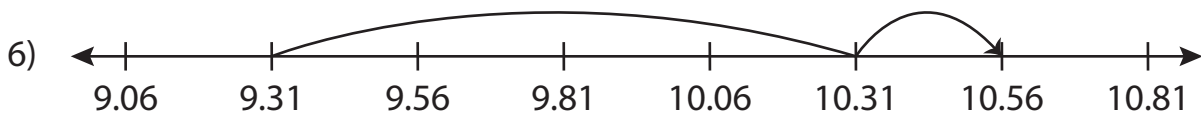
Complete the addition sentence that describes each model.



$$\underline{2.49} + 0.42 = 2.91$$



$$4.07 + \underline{0.35} = 4.42$$



$$9.31 + 1.25 = \underline{10.56}$$

PREVIEW

Gain complete access to the largest collection of worksheets in all subjects!

Members, please log in to download this worksheet.

Not a member? Please sign up to gain complete access.

www.mathworksheets4kids.com