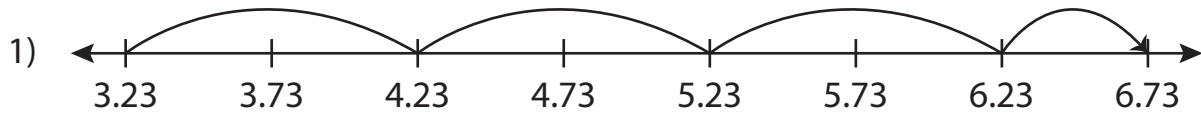


Name : _____

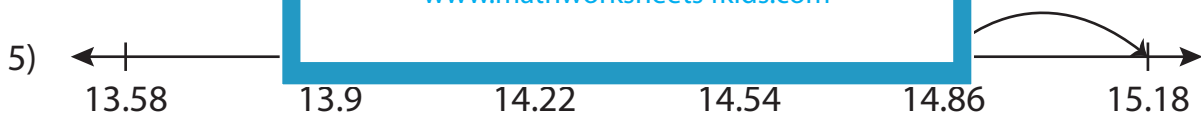
Addition Sentence - Missing Numbers

Hundredth: S4

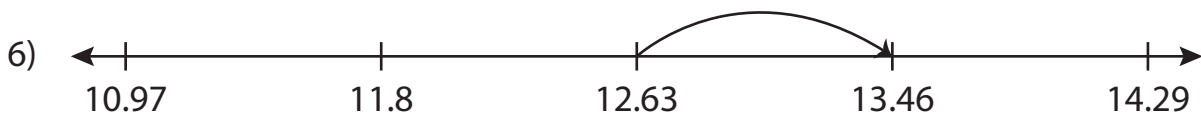
Complete the addition sentence that describes each model.



$$3.23 + \underline{\hspace{2cm}} = 6.73$$



$$14.54 + 0.64 = \underline{\hspace{2cm}}$$



$$\underline{\hspace{2cm}} + 0.83 = 13.46$$

PREVIEW

Gain complete access to the largest collection of worksheets in all subjects!

Members, please log in to download this worksheet.

Not a member? Please sign up to gain complete access.

www.mathworksheets4kids.com

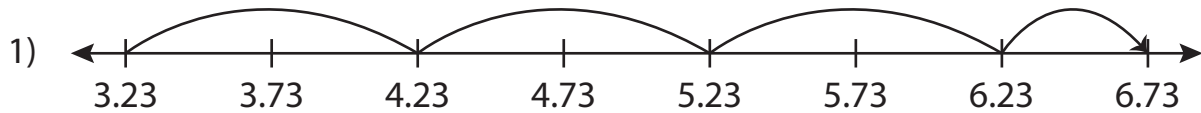
Name : _____

Answer key

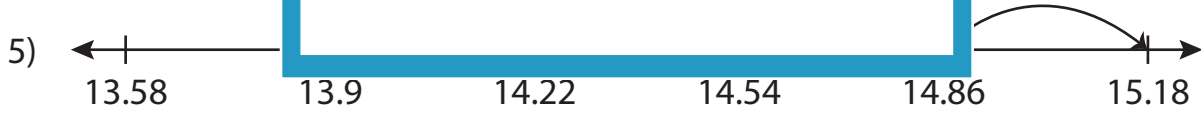
Addition Sentence - Missing Numbers

Hundredth: S4

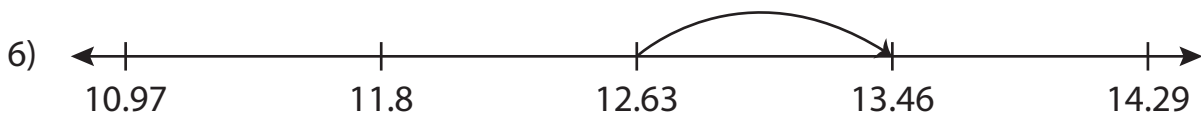
Complete the addition sentence that describes each model.



$$3.23 + \underline{3.5} = 6.73$$



$$14.54 + 0.64 = \underline{15.18}$$



$$\underline{12.63} + 0.83 = 13.46$$

PREVIEW

Gain complete access to the largest collection of worksheets in all subjects!

Members, please log in to download this worksheet.

Not a member? Please sign up to gain complete access.

www.mathworksheets4kids.com