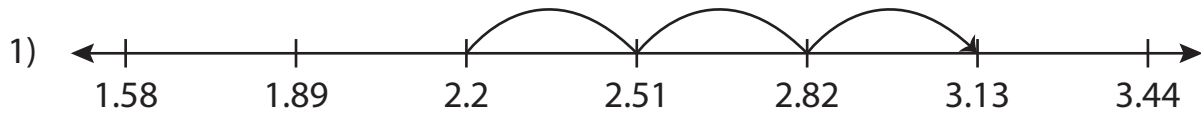


Name : _____

Addition Sentence - Missing Numbers

Hundredth: S5

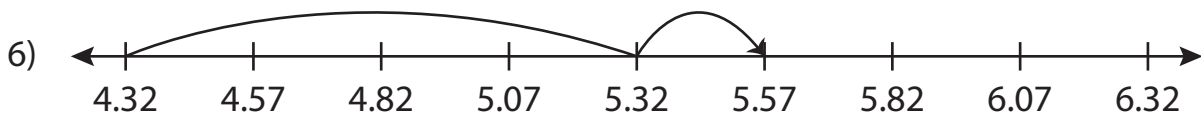
Complete the addition sentence that describes each model.



$$2.2 + 0.93 = \underline{\hspace{2cm}}$$



$$16.69 + 5 = \underline{\hspace{2cm}}$$



$$4.32 + \underline{\hspace{2cm}} = 5.57$$

PREVIEW

Gain complete access to the largest collection of worksheets in all subjects!

Members, please log in to download this worksheet.

Not a member? Please sign up to gain complete access.

www.mathworksheets4kids.com

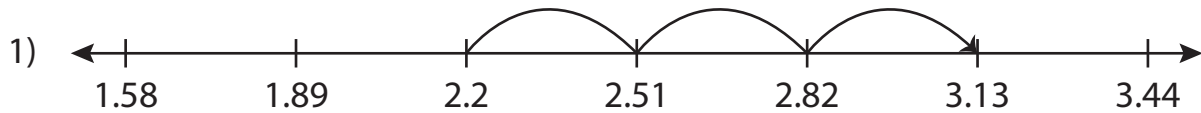
Name : _____

Answer key

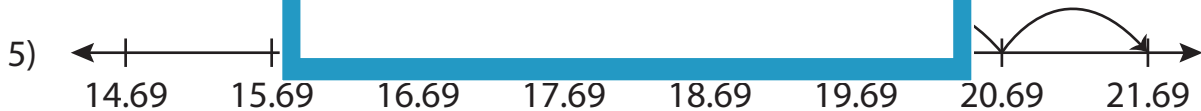
Addition Sentence - Missing Numbers

Hundredth: S5

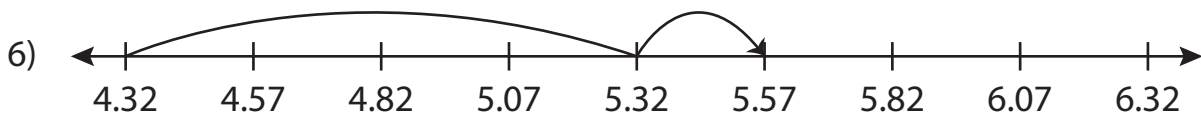
Complete the addition sentence that describes each model.



$$2.2 + 0.93 = \underline{3.13}$$



$$16.69 + 5 = \underline{21.69}$$



$$4.32 + \underline{1.25} = 5.57$$

PREVIEW

Gain complete access to the largest collection of worksheets in all subjects!

Members, please log in to download this worksheet.

Not a member? Please sign up to gain complete access.

www.mathworksheets4kids.com