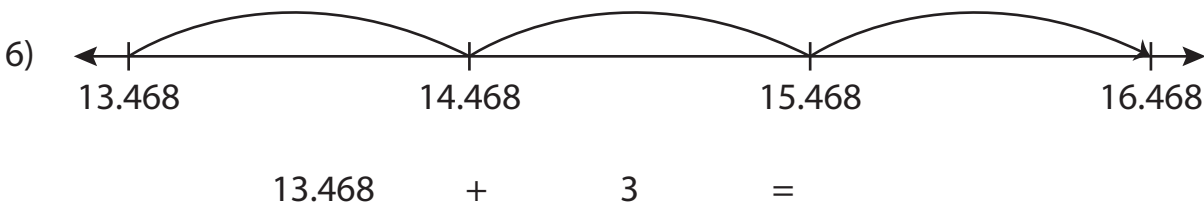
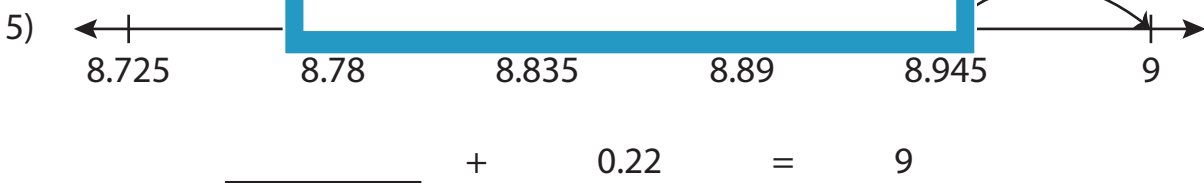
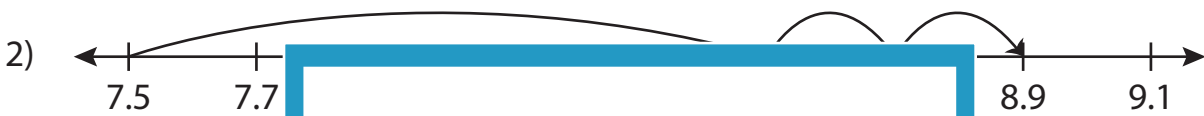
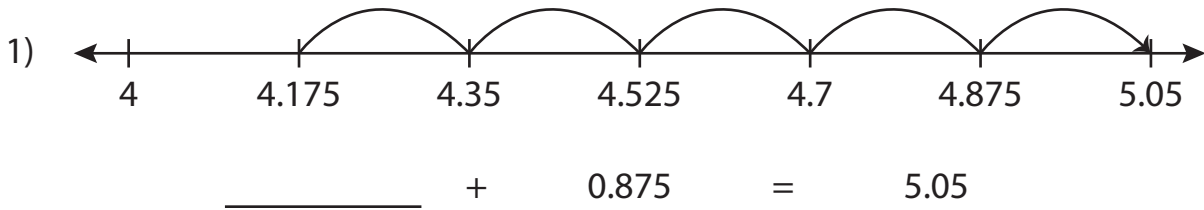


Name : _____

Addition Sentence - Missing Numbers

Sheet 1

Complete the addition sentence that describes each model.



PREVIEW

Gain complete access to the largest collection of worksheets in all subjects!

Members, please log in to download this worksheet.

Not a member? Please sign up to gain complete access.

www.mathworksheets4kids.com

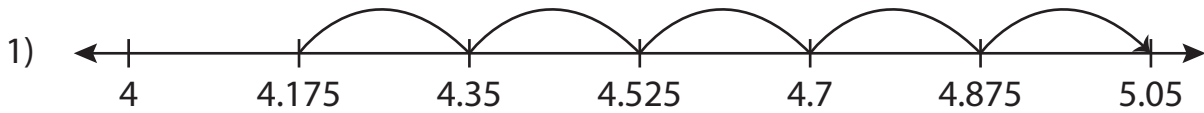
Name : _____

Answer key

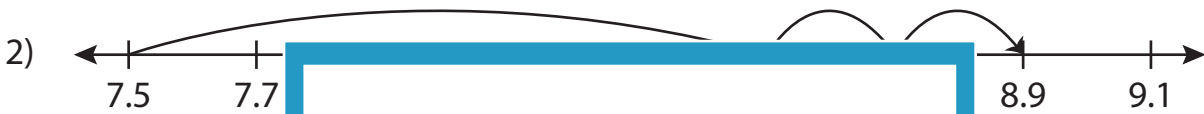
Addition Sentence - Missing Numbers

Sheet 1

Complete the addition sentence that describes each model.



$$\underline{4.175} + 0.875 = 5.05$$



$$\underline{8.78} + 0.22 = 9$$



$$13.468 + 3 = \underline{16.468}$$

PREVIEW

Gain complete access to the largest collection of worksheets in all subjects!

Members, please log in to download this worksheet.

Not a member? Please sign up to gain complete access.

www.mathworksheets4kids.com