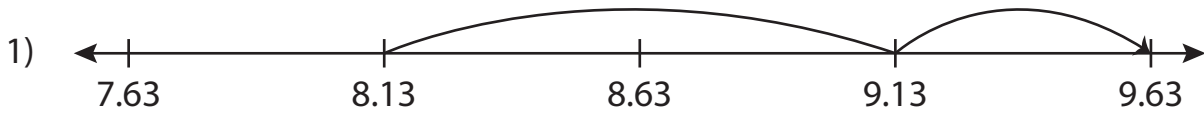



Addition Sentence - Missing Numbers

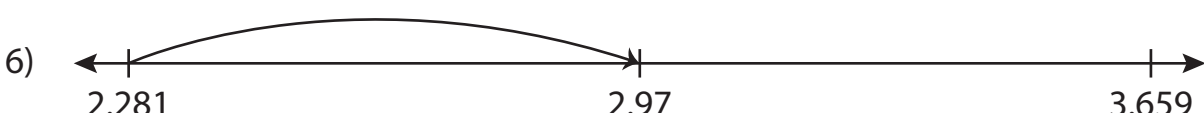
Complete the addition sentence that describes each model.



$$8.13 + \underline{\hspace{2cm}} = 9.63$$



$$14 + \underline{\hspace{2cm}} = 14.735$$



$$\underline{\hspace{2cm}} + 0.689 = 2.97$$

PREVIEW

Gain complete access to the largest collection of worksheets in all subjects!

Members, please log in to download this worksheet.

Not a member? Please sign up to gain complete access.

www.mathworksheets4kids.com

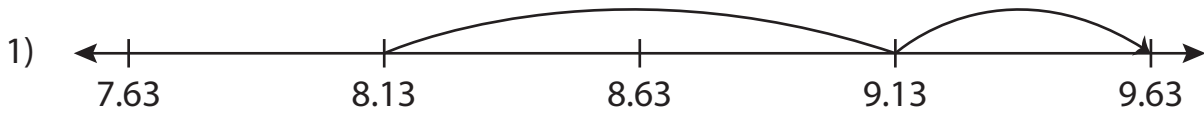
Name: _____

Answer key


Addition Sentence - Missing Numbers

Sheet 3

Complete the addition sentence that describes each model.



$$8.13 + \underline{1.5} = 9.63$$



$$14 + \underline{0.735} = 14.735$$



$$\underline{2.281} + 0.689 = 2.97$$

PREVIEW

Gain complete access to the largest collection of worksheets in all subjects!

Members, please log in to download this worksheet.

Not a member? Please sign up to gain complete access.

www.mathworksheets4kids.com