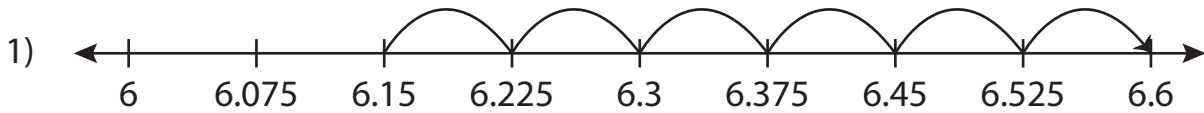
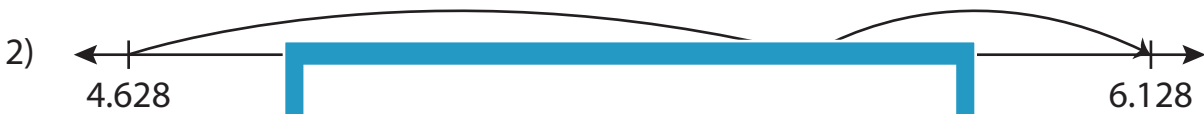


## Addition Sentence - Missing Numbers

Complete the addition sentence that describes each model.



$$6.15 + 0.45 = \underline{\hspace{2cm}}$$



$$6.14 + 1.25 = \underline{\hspace{2cm}}$$



$$7.41 + \underline{\hspace{2cm}} = 8.085$$

# PREVIEW

Gain complete access to the largest collection of worksheets in all subjects!

Members, please log in to download this worksheet.

Not a member? Please sign up to gain complete access.

[www.mathworksheets4kids.com](http://www.mathworksheets4kids.com)

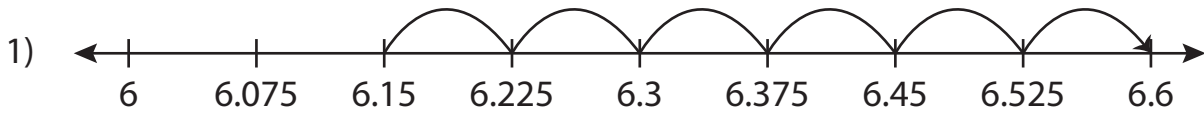
Name : \_\_\_\_\_

## Answer key

### Addition Sentence - Missing Numbers

Sheet 5

Complete the addition sentence that describes each model.



$$6.15 + 0.45 = \underline{6.6}$$



$$6.14 + 1.25 = \underline{7.39}$$



$$7.41 + \underline{0.675} = 8.085$$

**PREVIEW**

Gain complete access to the largest collection of worksheets in all subjects!

Members, please log in to download this worksheet.

Not a member? Please sign up to gain complete access.

[www.mathworksheets4kids.com](http://www.mathworksheets4kids.com)