

Name : _____

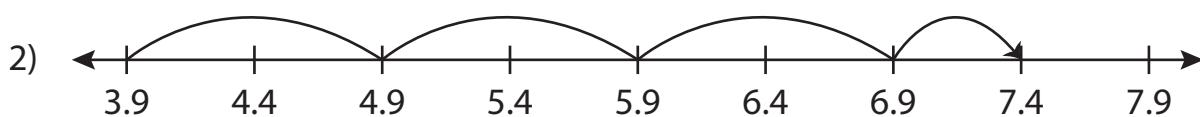
Addition Sentence - Missing Numbers

Tenth: S1

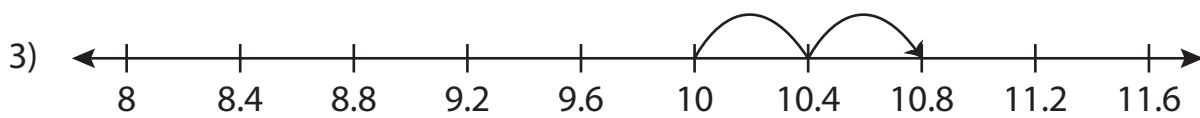
Complete the addition sentence that describes each model.



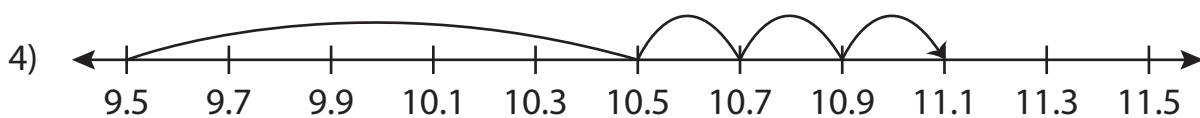
$$7.4 + \underline{\quad\quad} = 14.4$$



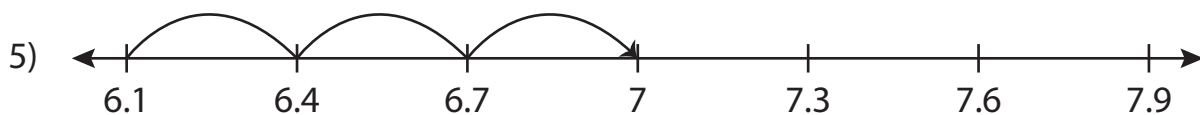
$$3.9 + 3.5 = \underline{\quad\quad}$$



$$\underline{\quad\quad} + 0.8 = 10.8$$



$$9.5 + 1.6 = \underline{\quad\quad}$$



$$6.1 + \underline{\quad\quad} = 7$$



$$\underline{\quad\quad} + 0.7 = 13.7$$

Name : _____

Answer key

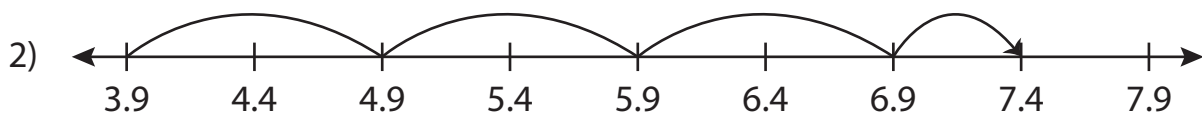
Addition Sentence - Missing Numbers

Tenth: S1

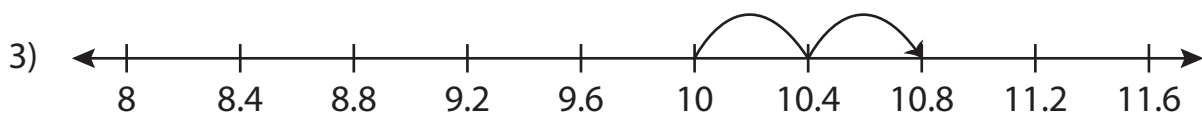
Complete the addition sentence that describes each model.



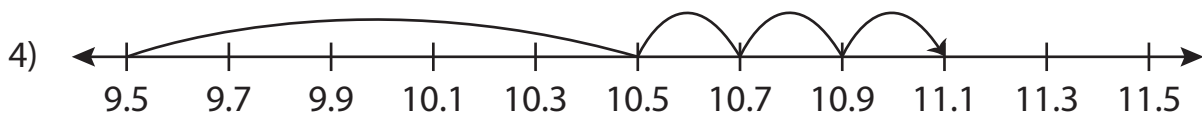
$$7.4 + \underline{7} = 14.4$$



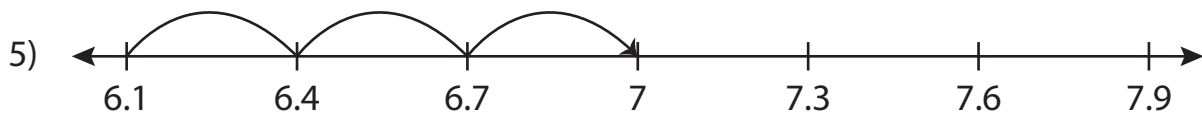
$$3.9 + 3.5 = \underline{7.4}$$



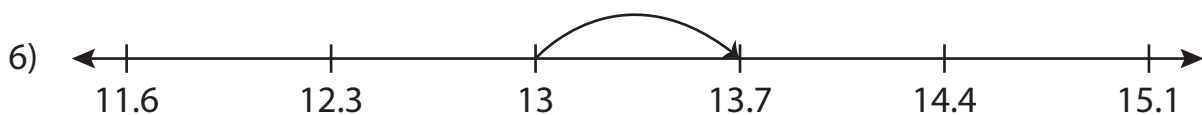
$$\underline{10} + 0.8 = 10.8$$



$$9.5 + 1.6 = \underline{11.1}$$



$$6.1 + \underline{0.9} = 7$$



$$\underline{13} + 0.7 = 13.7$$