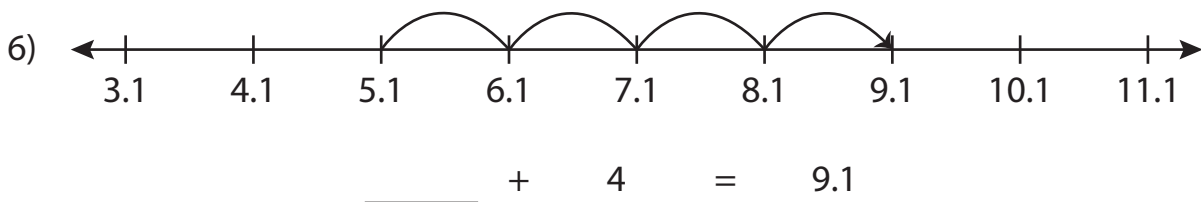

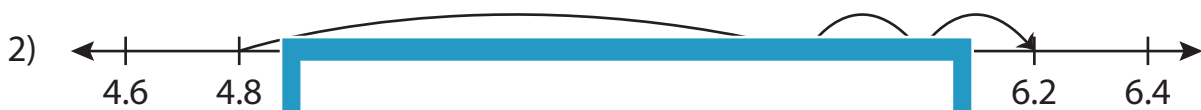
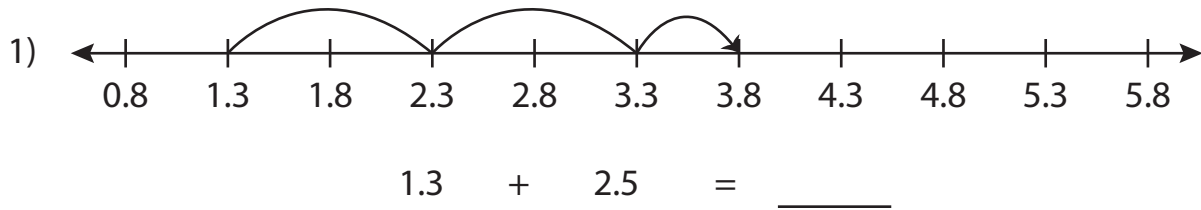


Name : _____

Addition Sentence - Missing Numbers

Tenth: S2

Complete the addition sentence that describes each model.



PREVIEW

Gain complete access to the largest collection of worksheets in all subjects!

Members, please log in to download this worksheet.

Not a member? Please sign up to gain complete access.

www.mathworksheets4kids.com

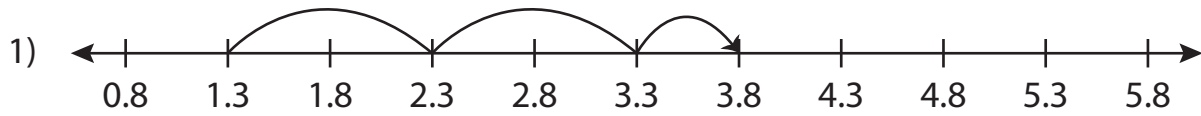
Name : _____

Answer key

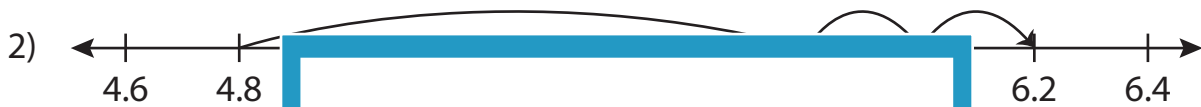
Addition Sentence - Missing Numbers

Tenth: S2

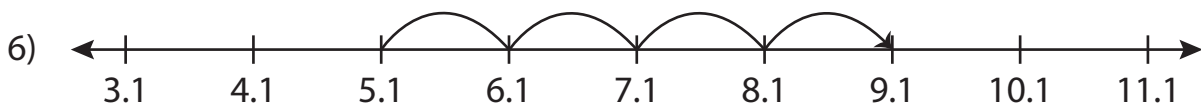
Complete the addition sentence that describes each model.



$$1.3 + 2.5 = \underline{3.8}$$



$$11.4 + 0.6 = \underline{12}$$



$$\underline{5.1} + 4 = 9.1$$

PREVIEW

Gain complete access to the largest collection of worksheets in all subjects!

Members, please log in to download this worksheet.

Not a member? Please sign up to gain complete access.

www.mathworksheets4kids.com