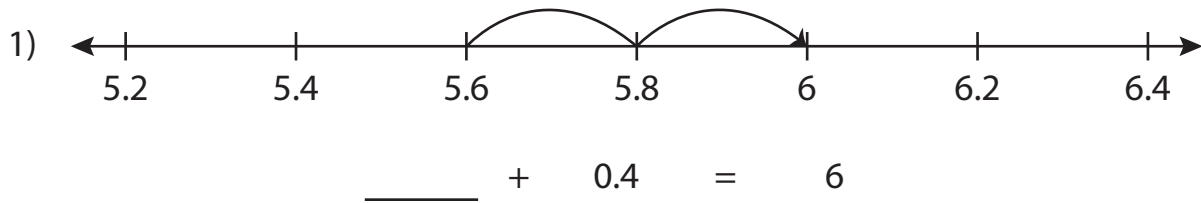


Name : _____

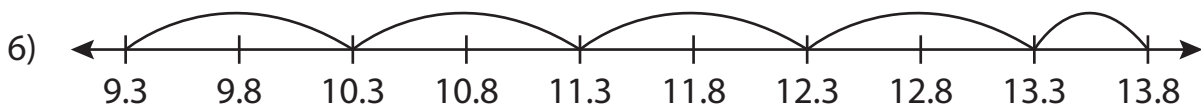
Addition Sentence - Missing Numbers

Tenth: S3

Complete the addition sentence that describes each model.



_____ + 1.2 = 4.1



9.3 + 4.5 = _____

PREVIEW

Gain complete access to the largest collection of worksheets in all subjects!

Members, please log in to download this worksheet.

Not a member? Please sign up to gain complete access.

www.mathworksheets4kids.com

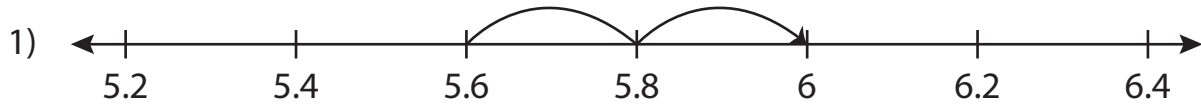
Name : _____

Answer key

Addition Sentence - Missing Numbers

Tenth: S3

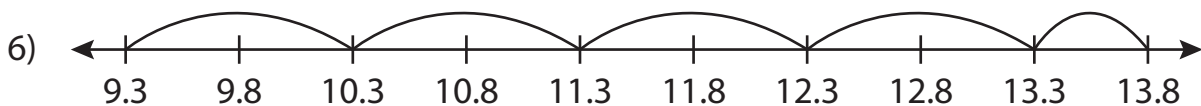
Complete the addition sentence that describes each model.



$$\underline{5.6} + 0.4 = 6$$



$$\underline{2.9} + 1.2 = 4.1$$



$$9.3 + 4.5 = \underline{13.8}$$

PREVIEW

Gain complete access to the largest collection of worksheets in all subjects!

Members, please log in to download this worksheet.

Not a member? Please sign up to gain complete access.

www.mathworksheets4kids.com