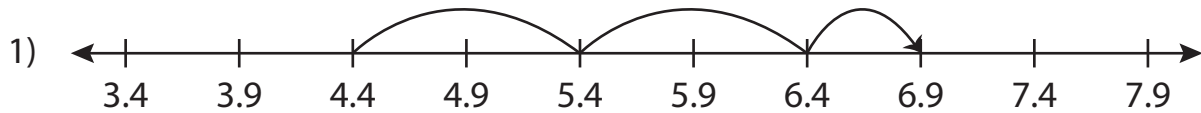


Name : _____

Addition Sentence - Missing Numbers

Tenth: S4

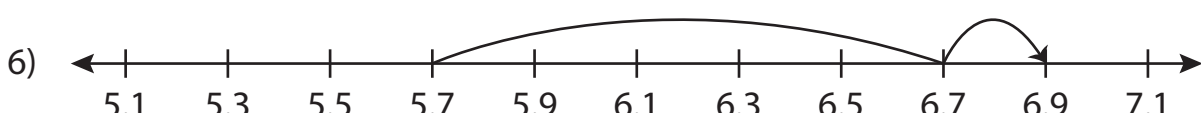
Complete the addition sentence that describes each model.



$$4.4 + 2.5 = \underline{\quad}$$



$$6.5 + \underline{\quad} = 10.5$$



$$\underline{\quad} + 1.2 = 6.9$$

PREVIEW

Gain complete access to the largest collection of worksheets in all subjects!

Members, please log in to download this worksheet.

Not a member? Please sign up to gain complete access.

www.mathworksheets4kids.com

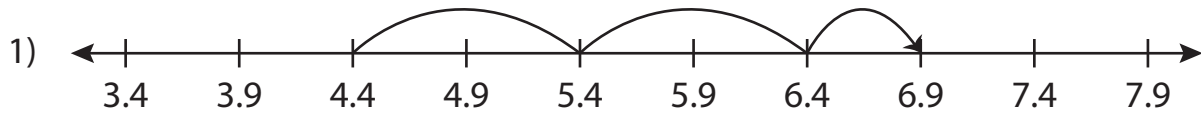
Name : _____

Answer key

Addition Sentence - Missing Numbers

Tenth: S4

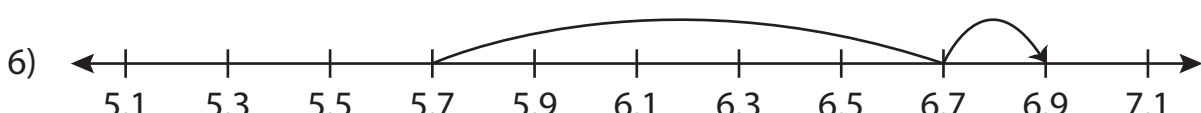
Complete the addition sentence that describes each model.



$$4.4 + 2.5 = \underline{6.9}$$



$$6.5 + \underline{4} = 10.5$$



$$\underline{5.7} + 1.2 = 6.9$$

PREVIEW

Gain complete access to the largest collection of worksheets in all subjects!

Members, please log in to download this worksheet.

Not a member? Please sign up to gain complete access.

www.mathworksheets4kids.com