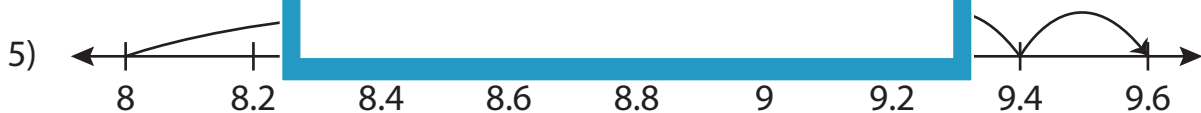
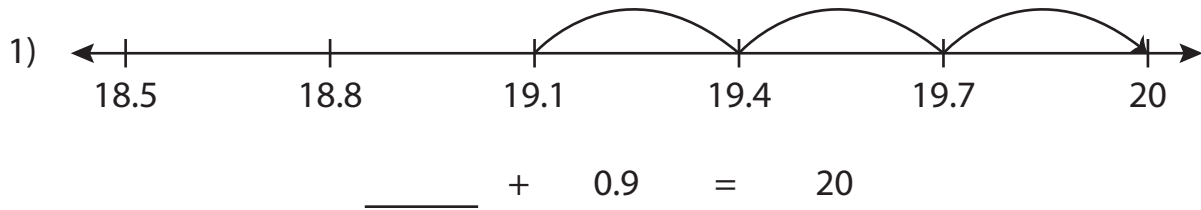


Name : _____

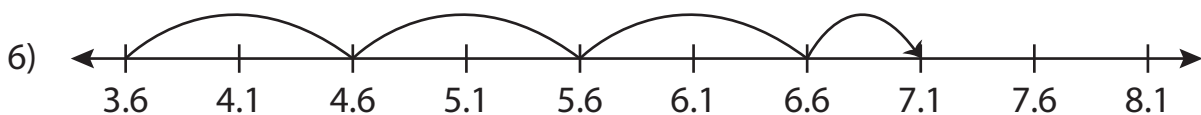
Addition Sentence - Missing Numbers

Tenth: S5

Complete the addition sentence that describes each model.



8 + 1.6 = _____



3.6 + _____ = 7.1

PREVIEW

Gain complete access to the largest collection of worksheets in all subjects!

Members, please log in to download this worksheet.

Not a member? Please sign up to gain complete access.

www.mathworksheets4kids.com

Name : _____

Answer key

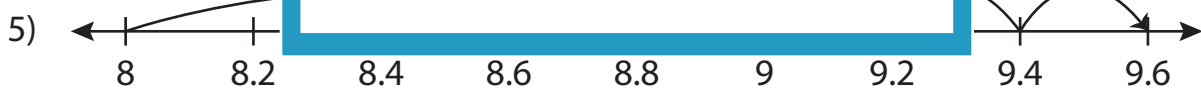
Addition Sentence - Missing Numbers

Tenth: S5

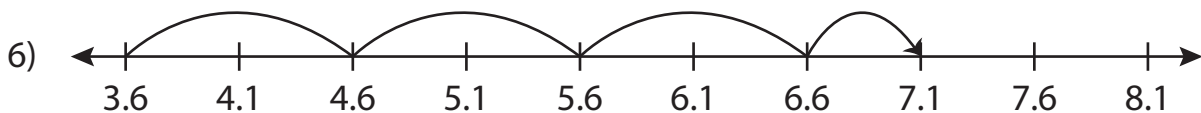
Complete the addition sentence that describes each model.



$$\underline{19.1} + 0.9 = 20$$



$$8 + 1.6 = \underline{9.6}$$



$$3.6 + \underline{3.5} = 7.1$$

PREVIEW

Gain complete access to the largest collection of worksheets in all subjects!

Members, please log in to download this worksheet.

Not a member? Please sign up to gain complete access.

www.mathworksheets4kids.com