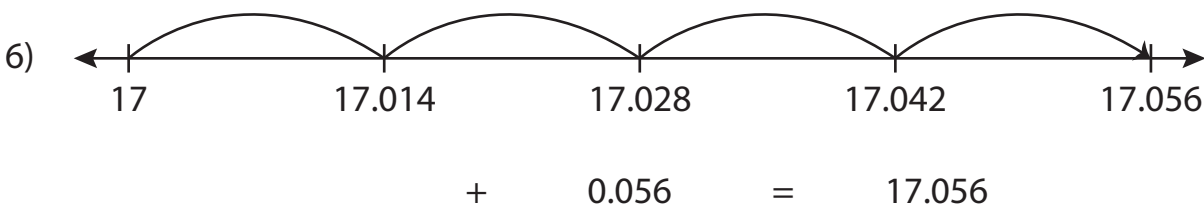
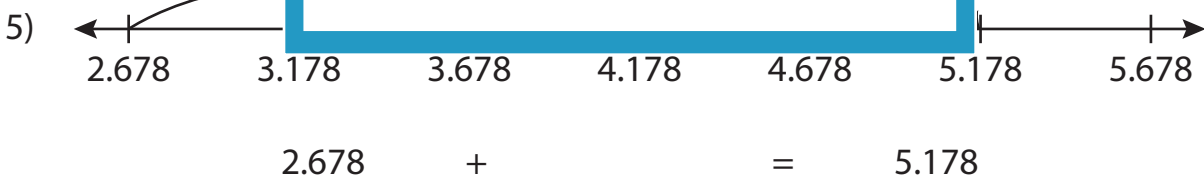
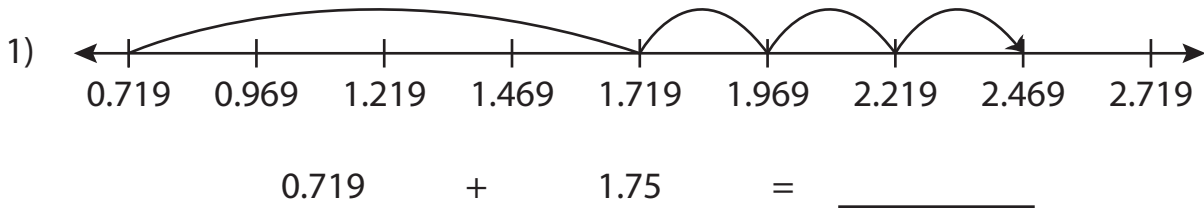


Name : _____

Addition Sentence - Missing Numbers

Thousandth: S1

Complete the addition sentence that describes each model.



PREVIEW

Gain complete access to the largest collection of worksheets in all subjects!

Members, please log in to download this worksheet.

Not a member? Please sign up to gain complete access.

www.mathworksheets4kids.com

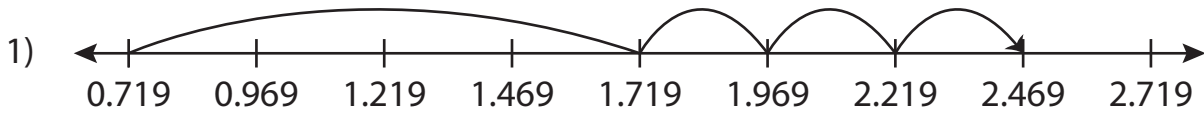
Name : _____

Answer key

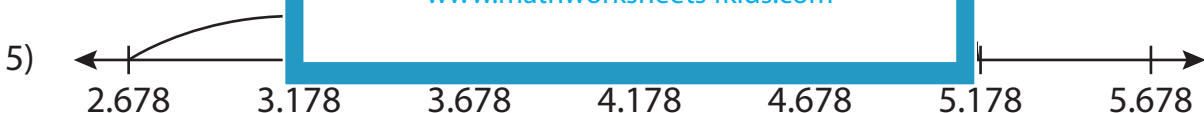
Addition Sentence - Missing Numbers

Thousandth: S1

Complete the addition sentence that describes each model.



$$0.719 + 1.75 = \underline{2.469}$$



$$2.678 + \underline{2.5} = 5.178$$



$$\underline{17} + 0.056 = 17.056$$

PREVIEW

Gain complete access to the largest collection of worksheets in all subjects!

Members, please log in to download this worksheet.

Not a member? Please sign up to gain complete access.

www.mathworksheets4kids.com