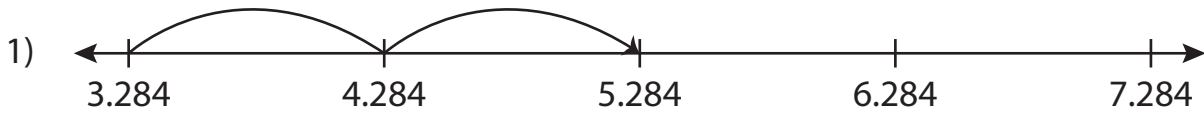


Name : _____

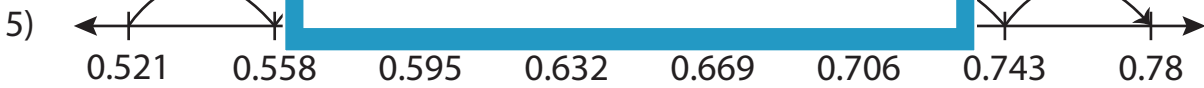
Addition Sentence - Missing Numbers

Thousandth: S2


Complete the addition sentence that describes each model.



$$3.284 + \underline{\hspace{2cm}} = 5.284$$



$$\underline{\hspace{2cm}} + 0.259 = 0.78$$



$$14.181 + 0.719 = \underline{\hspace{2cm}}$$

PREVIEW

Gain complete access to the largest collection of worksheets in all subjects!

Members, please log in to download this worksheet.

Not a member? Please sign up to gain complete access.

www.mathworksheets4kids.com

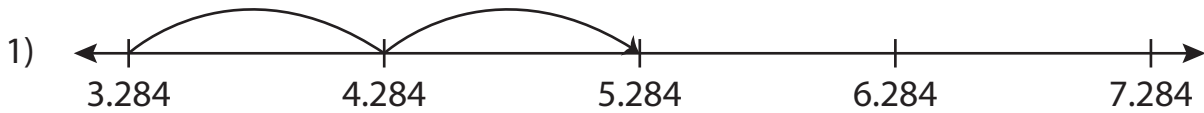
Name : _____

Answer key

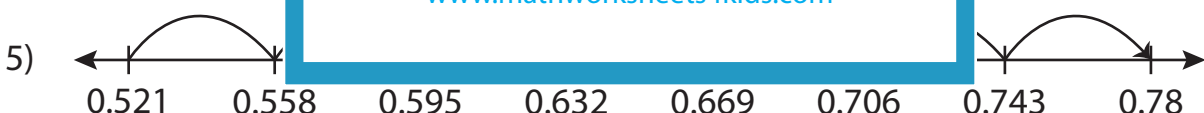
Addition Sentence - Missing Numbers

Thousandth: S2


Complete the addition sentence that describes each model.



$$3.284 + \underline{2} = 5.284$$



$$\underline{0.521} + 0.259 = 0.78$$



$$14.181 + 0.719 = \underline{14.9}$$

PREVIEW

Gain complete access to the largest collection of worksheets in all subjects!

Members, please log in to download this worksheet.

Not a member? Please sign up to gain complete access.

www.mathworksheets4kids.com