
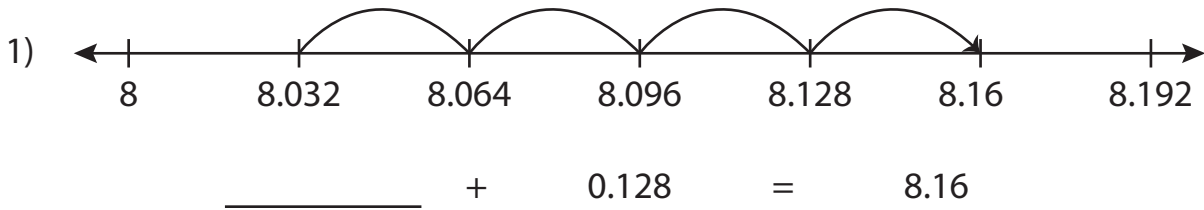


Name : _____

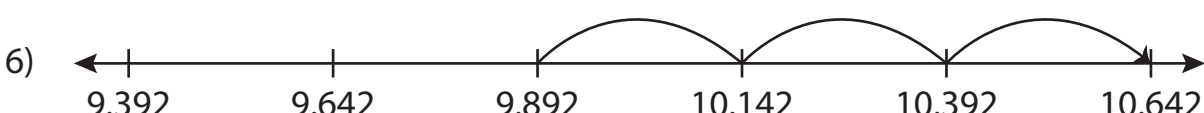
Addition Sentence - Missing Numbers

Thousandth: S3

Complete the addition sentence that describes each model.



$$6.257 + 1.4 = \underline{\hspace{2cm}}$$



$$9.892 + \underline{\hspace{2cm}} = 10.642$$

PREVIEW

Gain complete access to the largest collection of worksheets in all subjects!

Members, please log in to download this worksheet.

Not a member? Please sign up to gain complete access.

www.mathworksheets4kids.com

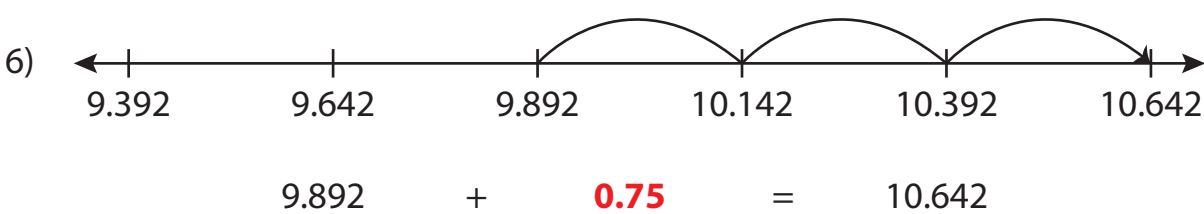

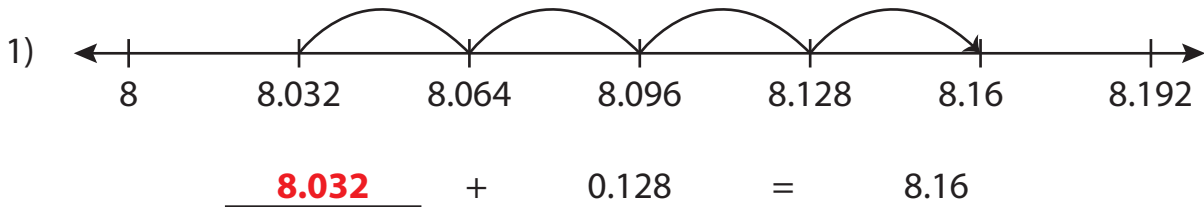
Name : _____

Answer key

Addition Sentence - Missing Numbers

Thousandth: S3

Complete the addition sentence that describes each model.



PREVIEW

Gain complete access to the largest collection of worksheets in all subjects!

Members, please log in to download this worksheet.

Not a member? Please sign up to gain complete access.

www.mathworksheets4kids.com