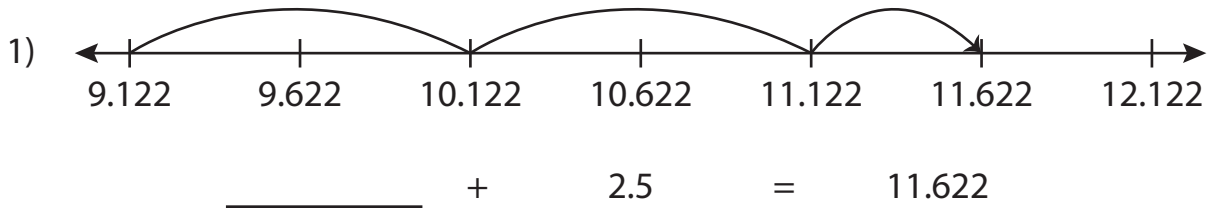


Name : _____

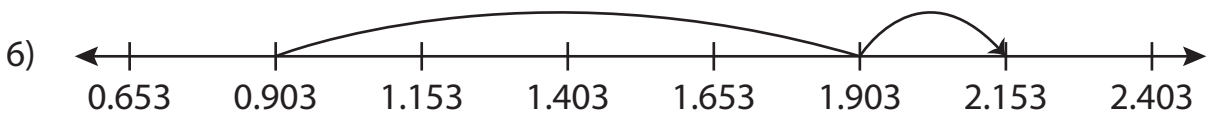
Addition Sentence - Missing Numbers

Thousandth: S5

Complete the addition sentence that describes each model.



15.921 + _____ = 20.921



_____ + 1.25 = 2.153

PREVIEW

Gain complete access to the largest collection of worksheets in all subjects!

Members, please log in to download this worksheet.

Not a member? Please sign up to gain complete access.

www.mathworksheets4kids.com

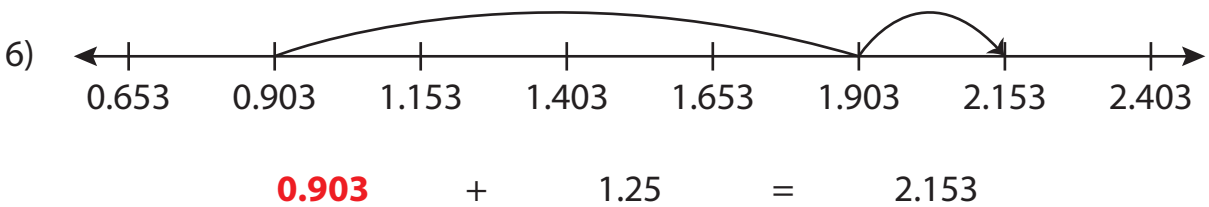
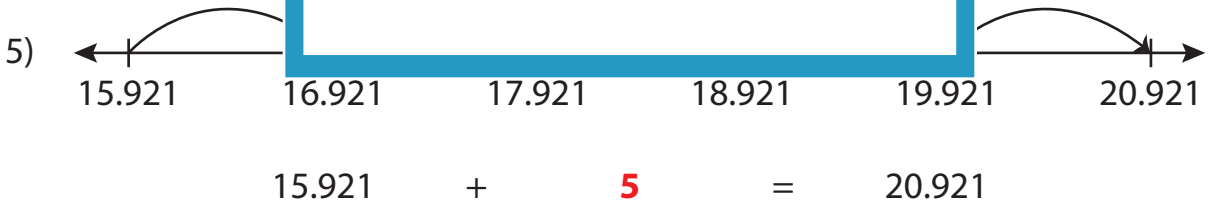
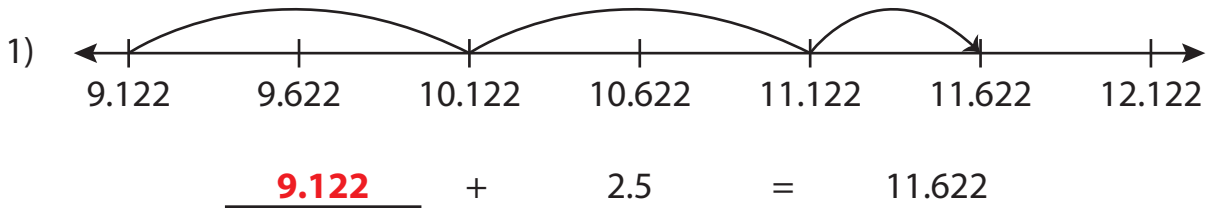
Name : _____

Answer key

Addition Sentence - Missing Numbers

Thousandth: S5

Complete the addition sentence that describes each model.



PREVIEW

Gain complete access to the largest collection of worksheets in all subjects!

Members, please log in to download this worksheet.

Not a member? Please sign up to gain complete access.

www.mathworksheets4kids.com