

Name : _____

Number Line Addition

Hops: S1

Indicate hops on each number line and complete the addition sentences.

1) $8.36 + 0.6 = \underline{\hspace{2cm}}$



2) $4.245 + 0.92 = \underline{\hspace{2cm}}$




3) $17.74 + \underline{\hspace{1cm}} = \underline{\hspace{1cm}}$



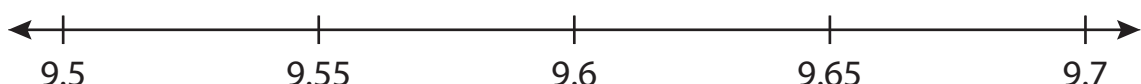
4) $6.8 + \underline{\hspace{1cm}} = \underline{\hspace{1cm}}$



5) $2.524 + \underline{\hspace{1cm}} = \underline{\hspace{1cm}}$



6) $9.5 + 0.2 = \underline{\hspace{2cm}}$



PREVIEW

Gain complete access to the largest collection of worksheets in all subjects!

Members, please log in to download this worksheet.

Not a member? Please sign up to gain complete access.

www.mathworksheets4kids.com

Name : _____

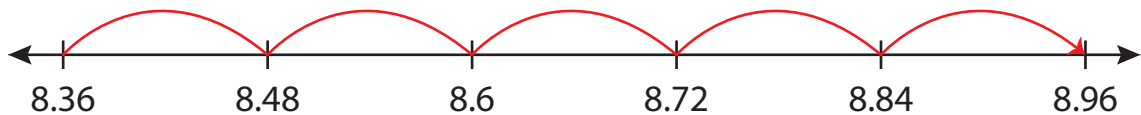
Answer key

Number Line Addition

Hops: 51

Indicate hops on each number line and complete the addition sentences.

1) $8.36 + 0.6 = \underline{8.96}$



2) $4.245 + 0.98 = \underline{5.225}$



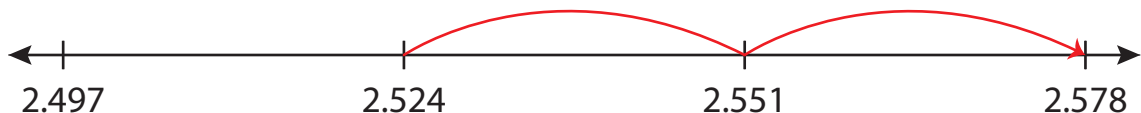
3) $17.74 + 0.479 = 18.211$



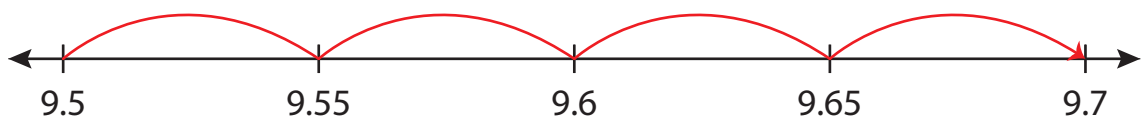
4) $6.8 + 1.2 = 8$



5) $2.524 + 0.047 = 2.571$



6) $9.5 + 0.2 = \underline{9.7}$



PREVIEW

Gain complete access to the largest collection of worksheets in all subjects!

Members, please log in to download this worksheet.

Not a member? Please sign up to gain complete access.

www.mathworksheets4kids.com