

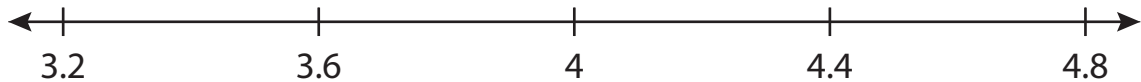
Name : \_\_\_\_\_

# Number Line Addition

Hops: S2

Indicate hops on each number line and complete the addition sentences.

1)  $3.6 + 0.8 = \underline{\hspace{2cm}}$



2)  $6.345 + 0.16 = \underline{\hspace{2cm}}$



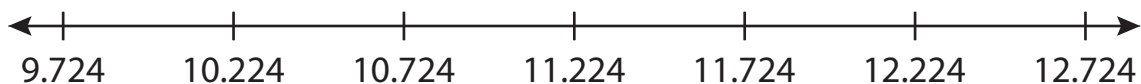
3)  $3.5 + \underline{\hspace{1cm}} = \underline{\hspace{1cm}}$




4)  $7.991 + \underline{\hspace{1cm}} = \underline{\hspace{1cm}}$



5)  $9.724 + \underline{\hspace{1cm}} = \underline{\hspace{1cm}}$



6)  $12.78 + 3 = \underline{\hspace{2cm}}$



# PREVIEW

Gain complete access to the largest collection of worksheets in all subjects!

Members, please log in to download this worksheet.

Not a member? Please sign up to gain complete access.

[www.mathworksheets4kids.com](http://www.mathworksheets4kids.com)

Name : \_\_\_\_\_

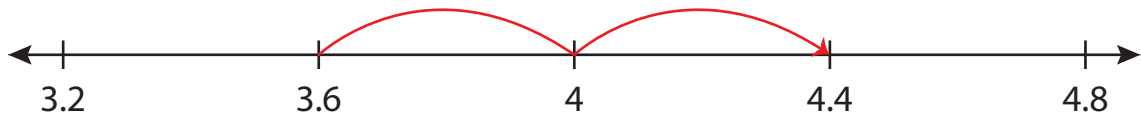
## Answer key

# Number Line Addition

Hops: S2

Indicate hops on each number line and complete the addition sentences.

1)  $3.6 + 0.8 = \underline{4.4}$



2)  $6.345 + 0.46 = \underline{6.805}$



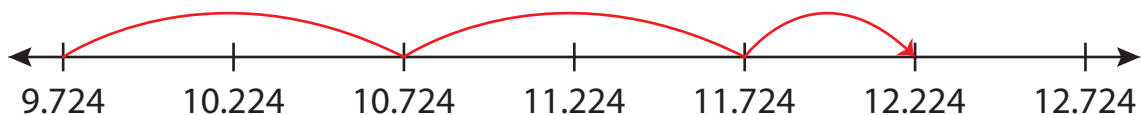
3)  $3.5 + 1.25 = \underline{4.75}$



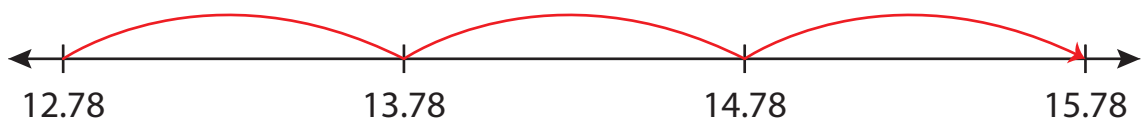
4)  $7.991 + 0.878 = \underline{8.869}$



5)  $9.724 + 2.5 = \underline{12.224}$



6)  $12.78 + 3 = \underline{15.78}$



# PREVIEW

Gain complete access to the largest collection of worksheets in all subjects!

Members, please log in to download this worksheet.

Not a member? Please sign up to gain complete access.

[www.mathworksheets4kids.com](http://www.mathworksheets4kids.com)