

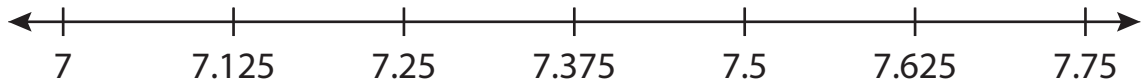
Name : \_\_\_\_\_

# Number Line Addition

Hops: S3

Indicate hops on each number line and complete the addition sentences.

1)  $7 + 0.625 = \underline{\hspace{2cm}}$



2)  $5.017 + \overset{2}{\quad} = \underline{\hspace{2cm}}$



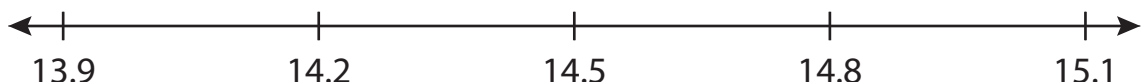
3)  $9.76 + \quad = \underline{\hspace{2cm}}$



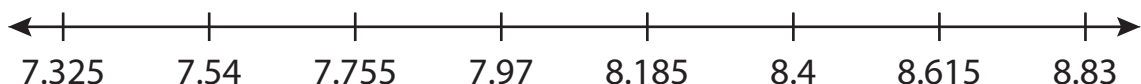
4)  $1.15 + \quad = \underline{\hspace{2cm}}$



5)  $14.2 + \quad = \underline{\hspace{2cm}}$



6)  $7.755 + 0.86 = \underline{\hspace{2cm}}$



**PREVIEW**

Gain complete access to the largest collection of worksheets in all subjects!

Members, please log in to download this worksheet.

Not a member? Please sign up to gain complete access.

[www.mathworksheets4kids.com](http://www.mathworksheets4kids.com)

Name : \_\_\_\_\_

## Answer key

# Number Line Addition

Hops: S3

Indicate hops on each number line and complete the addition sentences.

1)  $7 + 0.625 = \underline{7.625}$



2)  $5.017 + 3 = \underline{8.017}$



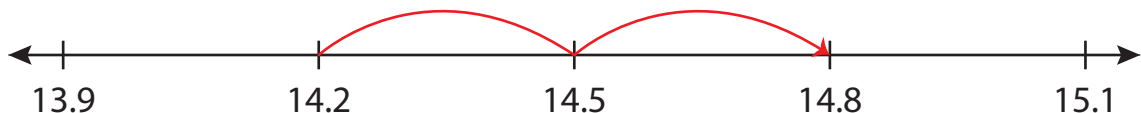
3)  $9.76 +$



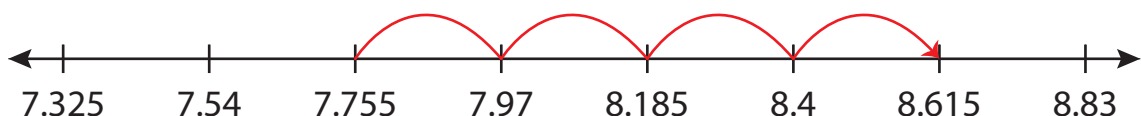
4)  $1.15 +$



5)  $14.2 +$



6)  $7.755 + 0.86 = \underline{8.615}$



**PREVIEW**

Gain complete access to the largest collection of worksheets in all subjects!

Members, please log in to download this worksheet.

Not a member? Please sign up to gain complete access.

[www.mathworksheets4kids.com](http://www.mathworksheets4kids.com)