

Name : _____

Number Line Addition

Hops: S5

Indicate hops on each number line and complete the addition sentences.

1) $17.14 + 0.48 = \underline{\hspace{2cm}}$



2) $15.05 + 2.5 = \underline{\hspace{2cm}}$



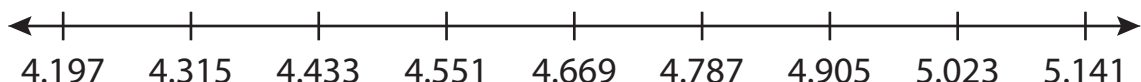
3) $8.6 + \underline{\hspace{1cm}} = \underline{\hspace{2cm}}$



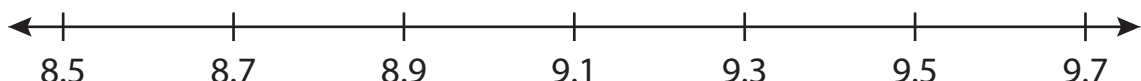
4) $2 + \underline{\hspace{1cm}} = \underline{\hspace{2cm}}$



5) $4.197 + \underline{\hspace{1cm}} = \underline{\hspace{2cm}}$



6) $8.5 + 1 = \underline{\hspace{2cm}}$



PREVIEW

Gain complete access to the largest collection of worksheets in all subjects!

Members, please log in to download this worksheet.

Not a member? Please sign up to gain complete access.

www.mathworksheets4kids.com

Name : _____

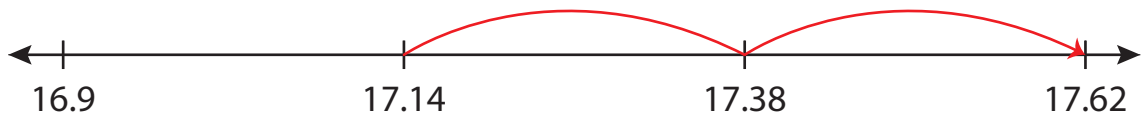
Answer key

Number Line Addition

Hops: S5

Indicate hops on each number line and complete the addition sentences.

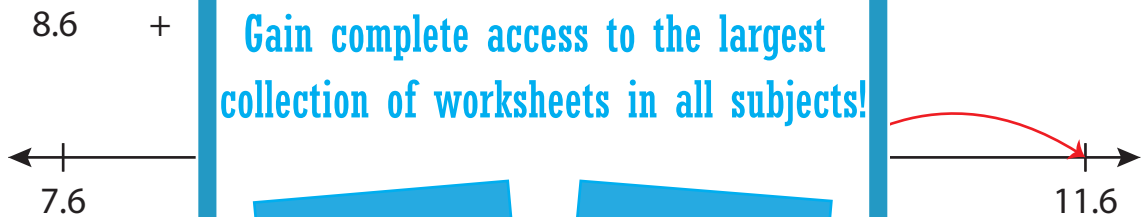
1) $17.14 + 0.48 = \underline{17.62}$



2) $15.05 + 2.5 = \underline{17.55}$



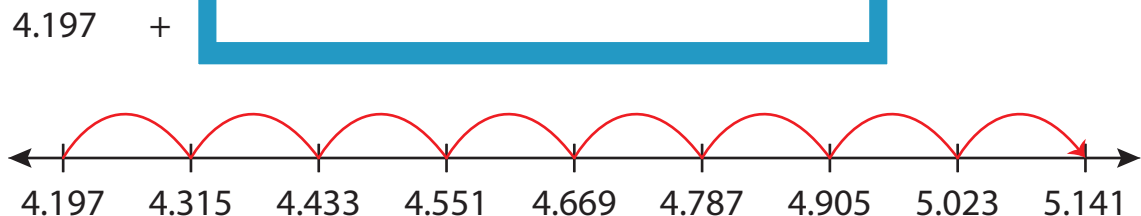
3) $8.6 + 3 = 11.6$



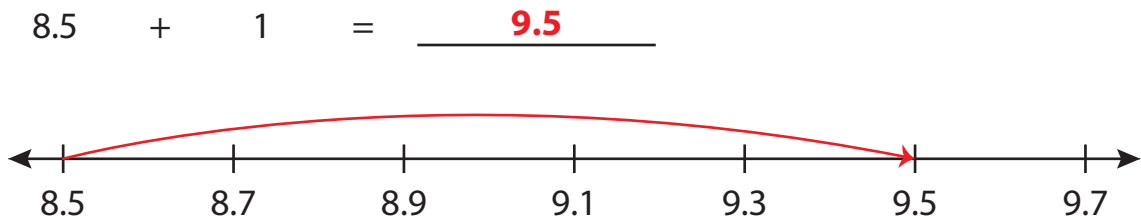
4) $2 + 0.15 = 2.15$



5) $4.197 + 1 = 5.197$



6) $8.5 + 1 = \underline{9.5}$



PREVIEW

Gain complete access to the largest collection of worksheets in all subjects!

Members, please log in to download this worksheet.

Not a member? Please sign up to gain complete access.

www.mathworksheets4kids.com