

Name : _____

Number Line Addition

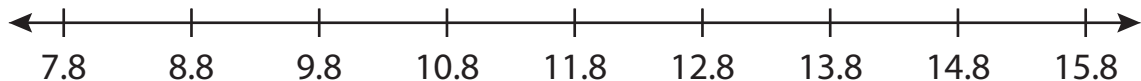
Hops-tenth: S1

Indicate hops on each number line and complete the addition sentences.

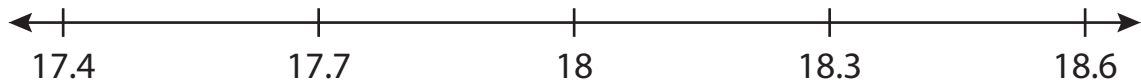
1) $6.3 + 0.4 =$ _____



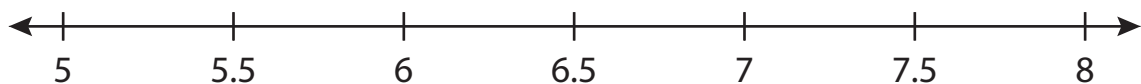
2) $8.8 + 6 =$ _____




3) $17.4 + 0.6 =$ _____




4) $5 + 2.5 =$ _____



5) $13.1 + 0.8 =$ _____



6) $3.7 + 1.4 =$ _____



Name: _____

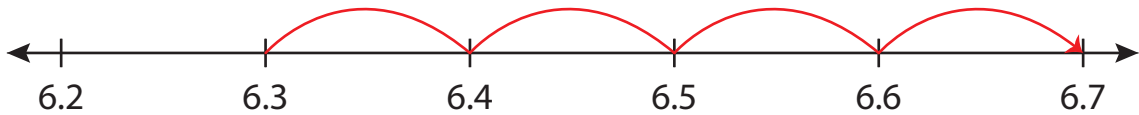
Answer key

Number Line Addition

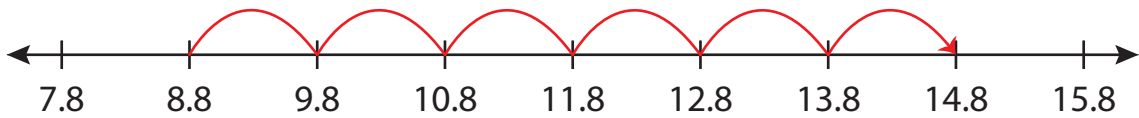
Hops-tenth: S1

Indicate hops on each number line and complete the addition sentences.

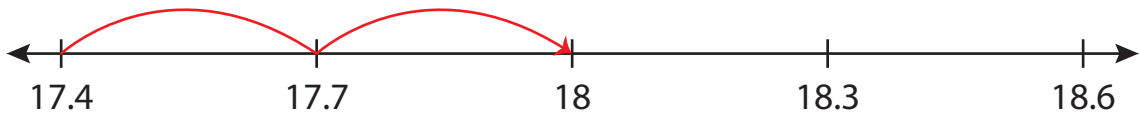
1) $6.3 + 0.4 = \underline{6.7}$



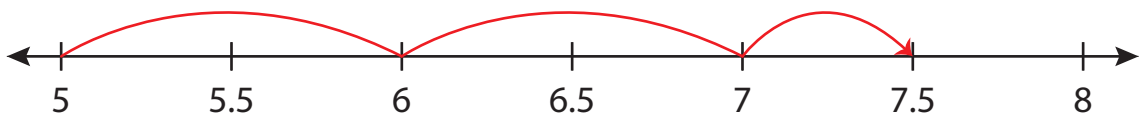
2) $8.8 + 6 = \underline{14.8}$



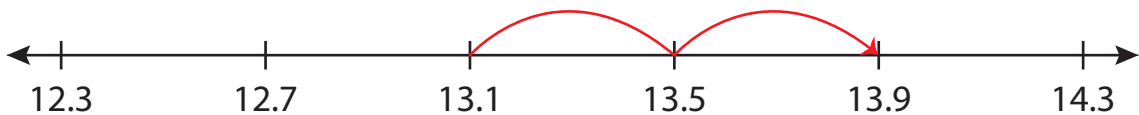
3) $17.4 + 0.6 = \underline{18}$



4) $5 + 2.5 = \underline{7.5}$



5) $13.1 + 0.8 = \underline{13.9}$



6) $3.7 + 1.4 = \underline{5.1}$

