


Name : _____

Number Line Addition

Hops-tenth: S2

Indicate hops on each number line and complete the addition sentences.

1) $3.3 + 0.7 = \underline{\hspace{2cm}}$



2) $4.7 + 1.2 = \underline{\hspace{2cm}}$



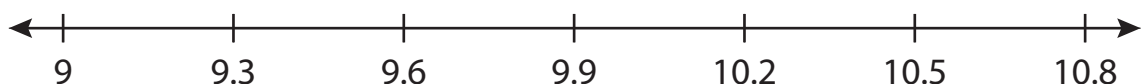
3) $8.2 + 3.0 = \underline{\hspace{2cm}}$



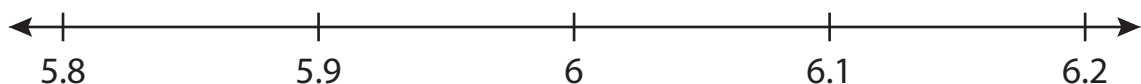
4) $14.4 + 4.0 = \underline{\hspace{2cm}}$



5) $9.6 + 0.3 = \underline{\hspace{2cm}}$



6) $5.8 + 0.3 = \underline{\hspace{2cm}}$



PREVIEW

Gain complete access to the largest collection of worksheets in all subjects!

Members, please log in to download this worksheet.

Not a member? Please sign up to gain complete access.

www.mathworksheets4kids.com

Name: _____


Answer key

Number Line Addition

Hops-tenth: S2

Indicate hops on each number line and complete the addition sentences.

1) $3.3 + 0.7 = \underline{4}$



2) $4.7 + 1.2 = \underline{5.9}$



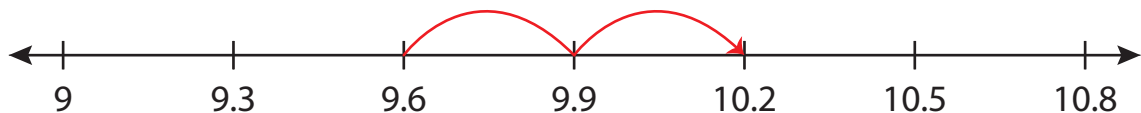
3) $8.2 + 3.5 = \underline{11.7}$



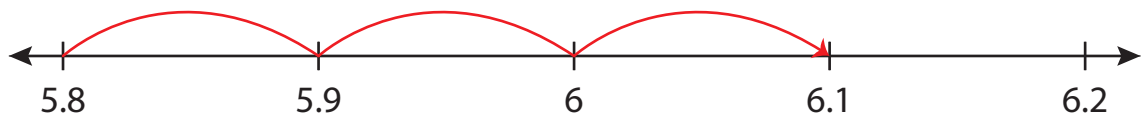
4) $14.4 + 4.0 = \underline{18.4}$



5) $9.6 + 0.6 = \underline{10.2}$



6) $5.8 + 0.3 = \underline{6.1}$



PREVIEW

Gain complete access to the largest collection of worksheets in all subjects!

Members, please log in to download this worksheet.

Not a member? Please sign up to gain complete access.

www.mathworksheets4kids.com