

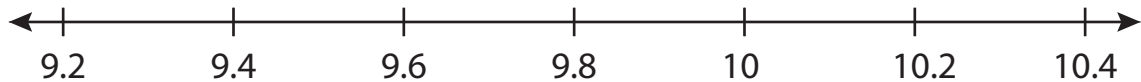
Name : \_\_\_\_\_

# Number Line Addition

Hops-tenth: S3

Indicate hops on each number line and complete the addition sentences.

1)  $9.2 + 1 = \underline{\hspace{2cm}}$



2)  $14 + 0.6 = \underline{\hspace{2cm}}$



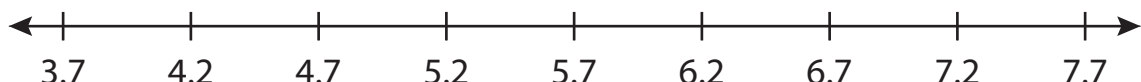
3)  $5.7 + 0.8 = \underline{\hspace{2cm}}$




4)  $11.5 + 0.9 = \underline{\hspace{2cm}}$



5)  $4.2 + 3 = \underline{\hspace{2cm}}$



6)  $2.3 + 3 = \underline{\hspace{2cm}}$



**PREVIEW**

Gain complete access to the largest collection of worksheets in all subjects!

Members, please log in to download this worksheet.

Not a member? Please sign up to gain complete access.

[www.mathworksheets4kids.com](http://www.mathworksheets4kids.com)

Name : \_\_\_\_\_

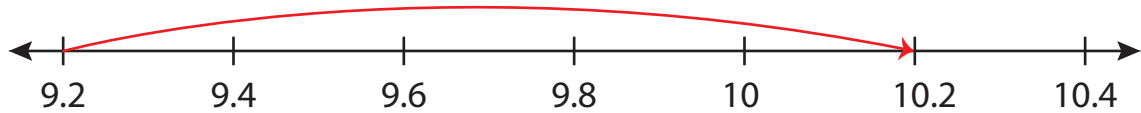
## Answer key

# Number Line Addition

Hops-tenth: S3

Indicate hops on each number line and complete the addition sentences.

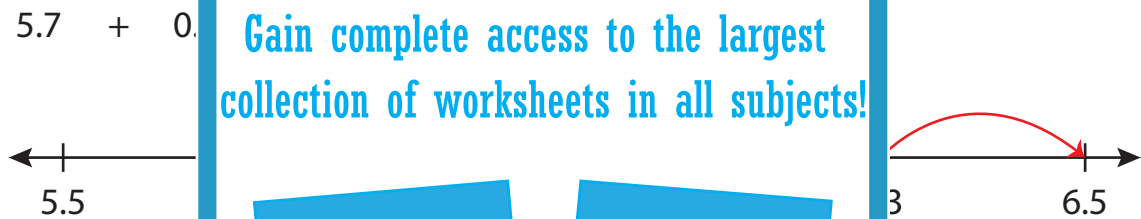
1)  $9.2 + 1 = \underline{10.2}$



2)  $14 + 0.6 = \underline{14.6}$



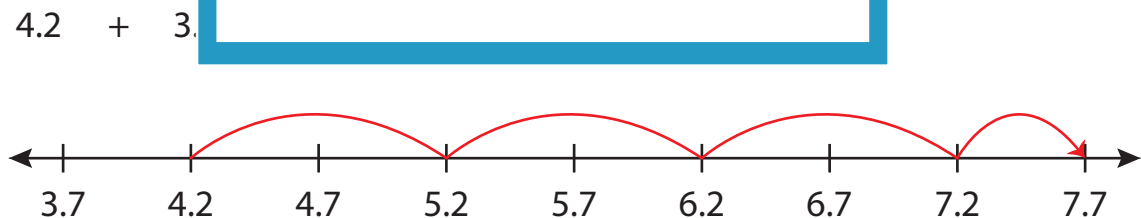
3)  $5.7 + 0.8 = \underline{6.5}$



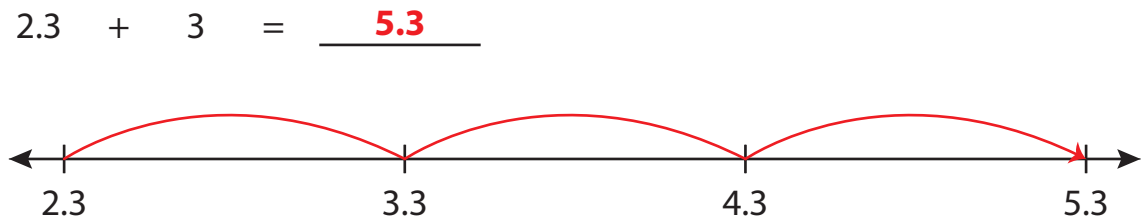
4)  $11.5 + 0.2 = \underline{11.7}$



5)  $4.2 + 3 = \underline{7.2}$



6)  $2.3 + 3 = \underline{5.3}$



**PREVIEW**

Gain complete access to the largest collection of worksheets in all subjects!

Members, please log in to download this worksheet.

Not a member? Please sign up to gain complete access.

[www.mathworksheets4kids.com](http://www.mathworksheets4kids.com)