

Name : _____

Number Line Addition

Hops-tenth: S4

Indicate hops on each number line and complete the addition sentences.

1) $12 + 1.5 = \underline{\hspace{2cm}}$



2) $5.3 + 0.4 = \underline{\hspace{2cm}}$




3) $10.1 + 5 = \underline{\hspace{2cm}}$



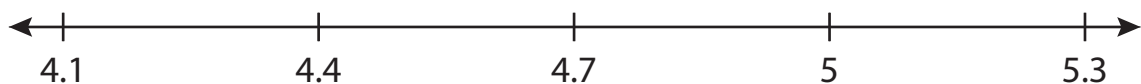
4) $6.6 + 1.6 = \underline{\hspace{2cm}}$



5) $3.2 + 0.7 = \underline{\hspace{2cm}}$



6) $4.1 + 0.9 = \underline{\hspace{2cm}}$



PREVIEW

Gain complete access to the largest collection of worksheets in all subjects!

Members, please log in to download this worksheet.

Not a member? Please sign up to gain complete access.

www.mathworksheets4kids.com

Name : _____

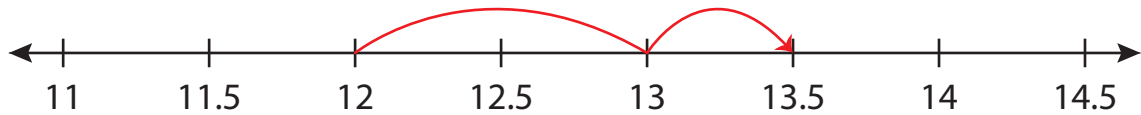
Answer key

Number Line Addition

Hops-tenth: S4

Indicate hops on each number line and complete the addition sentences.

1) $12 + 1.5 = \underline{13.5}$



2) $5.3 + 0.4 = \underline{5.7}$



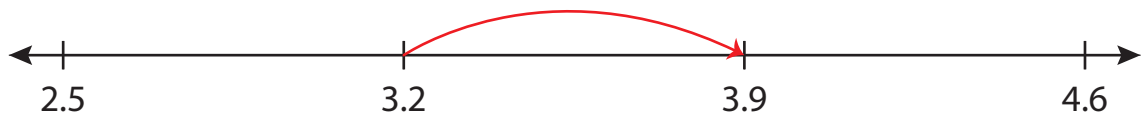
3) $10.1 + 5 = \underline{15.1}$



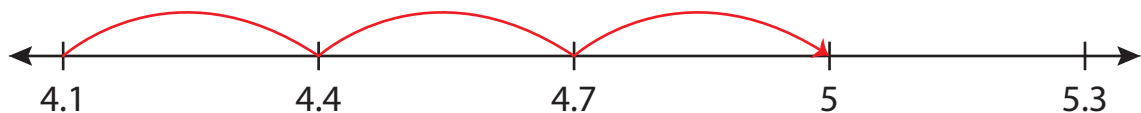
4) $6.6 + 1.6 = \underline{8.2}$



5) $3.2 + 0.7 = \underline{3.9}$



6) $4.1 + 0.9 = \underline{5}$



PREVIEW

Gain complete access to the largest collection of worksheets in all subjects!

Members, please log in to download this worksheet.

Not a member? Please sign up to gain complete access.

www.mathworksheets4kids.com