

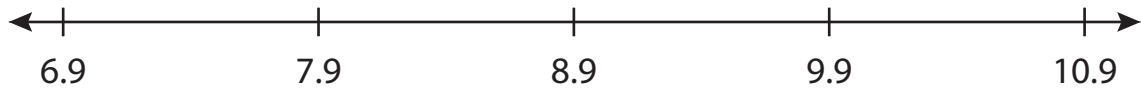
Name : _____

Number Line Addition

Hops-tenth: S5

Indicate hops on each number line and complete the addition sentences.

1) $7.9 + 3 = \underline{\hspace{2cm}}$



2) $19.5 + 0.8 = \underline{\hspace{2cm}}$



3) $4.6 + 0.8 = \underline{\hspace{2cm}}$




4) $3.1 + 0.3 = \underline{\hspace{2cm}}$



5) $15.6 + 2.5 = \underline{\hspace{2cm}}$



6) $7.7 + 1.2 = \underline{\hspace{2cm}}$



PREVIEW

Gain complete access to the largest collection of worksheets in all subjects!

Members, please log in to download this worksheet.

Not a member? Please sign up to gain complete access.

www.mathworksheets4kids.com

Name : _____

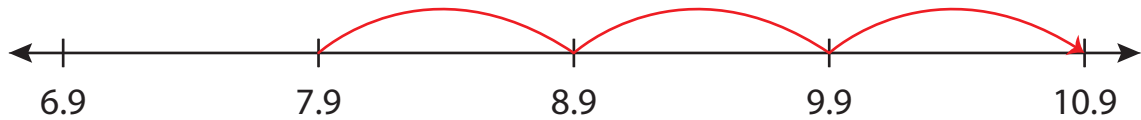
Answer key

Number Line Addition

Hops-tenth: S5

Indicate hops on each number line and complete the addition sentences.

1) $7.9 + 3 = \underline{10.9}$



2) $19.5 + 0.8 = \underline{20.3}$



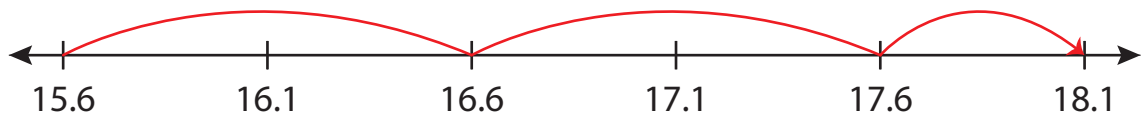
3) $4.6 + 0.8 = \underline{5.4}$




4) $3.1 + 0.3 = \underline{3.4}$



5) $15.6 + 2.4 = \underline{18.0}$



6) $7.7 + 1.2 = \underline{8.9}$



PREVIEW

Gain complete access to the largest collection of worksheets in all subjects!

Members, please log in to download this worksheet.

Not a member? Please sign up to gain complete access.

www.mathworksheets4kids.com