

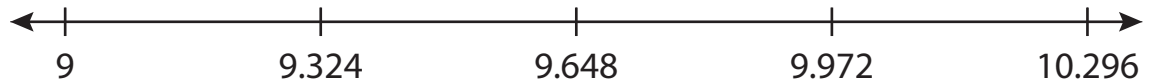
Name : _____

Number Line Addition

Hops-thousandth: S1

Indicate hops on each number line and complete the addition sentences.

1) $9 + 0.972 = \underline{\hspace{2cm}}$



2) $2.116 + 1.25 = \underline{\hspace{2cm}}$



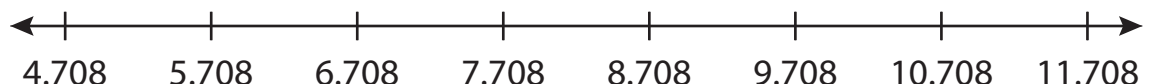
3) $13.332 + 1.335 = \underline{\hspace{2cm}}$



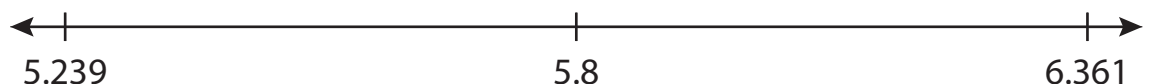
4) $0.895 + 0.8 = \underline{\hspace{2cm}}$



5) $6.708 + 0.972 = \underline{\hspace{2cm}}$



6) $5.239 + 0.561 = \underline{\hspace{2cm}}$



PREVIEW

Gain complete access to the largest collection of worksheets in all subjects!

Members, please log in to download this worksheet.

Not a member? Please sign up to gain complete access.

www.mathworksheets4kids.com

Name : _____

Answer key

Number Line Addition

Hops-thousandth: S1

Indicate hops on each number line and complete the addition sentences.

1) $9 + 0.972 = \underline{9.972}$



2) $2.116 + 1.25 = \underline{3.366}$



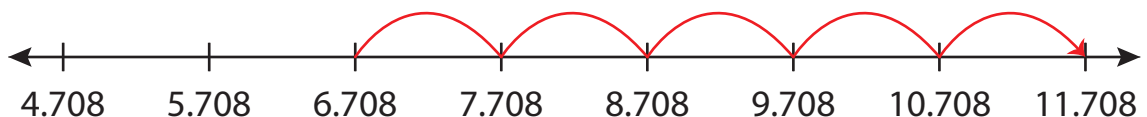
3) $13.332 + 13.225 = 26.557$



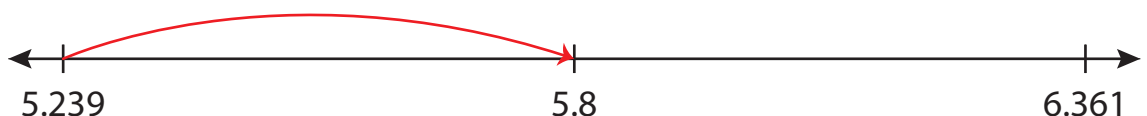
4) $0.895 + 0.395 = 1.29$



5) $6.708 + 5.072 = 11.78$



6) $5.239 + 0.561 = \underline{5.8}$



PREVIEW

Gain complete access to the largest collection of worksheets in all subjects!

Members, please log in to download this worksheet.

Not a member? Please sign up to gain complete access.

www.mathworksheets4kids.com