

Name : _____

Number Line Addition

Hops-thousandth: S3

Indicate hops on each number line and complete the addition sentences.

1) $7.188 + 4 = \underline{\hspace{2cm}}$



2) $8.456 + 0.234 = \underline{\hspace{2cm}}$




3) $3.541 + \underline{\hspace{1cm}} = \underline{\hspace{1cm}}$



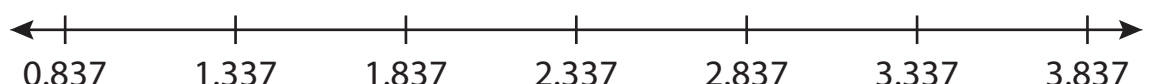
4) $7.366 + \underline{\hspace{1cm}} = \underline{\hspace{1cm}}$



5) $11.775 + \underline{\hspace{1cm}} = \underline{\hspace{1cm}}$



6) $0.837 + 3 = \underline{\hspace{2cm}}$



PREVIEW

Gain complete access to the largest collection of worksheets in all subjects!

Members, please log in to download this worksheet.

Not a member? Please sign up to gain complete access.

www.mathworksheets4kids.com

Name : _____

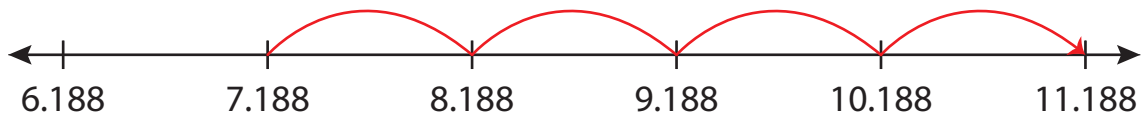
Answer key

Number Line Addition

Hops-thousandth: S3

Indicate hops on each number line and complete the addition sentences.

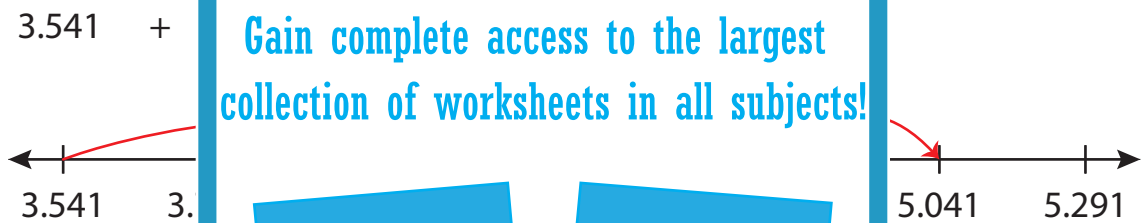
1) $7.188 + 4 = \underline{11.188}$



2) $8.456 + 0.234 = \underline{8.69}$



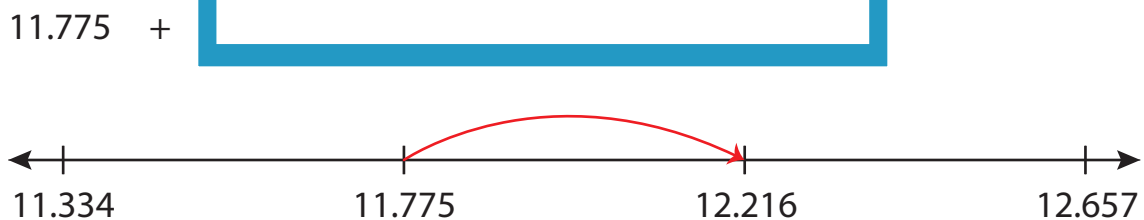
3) $3.541 + \quad = \quad$



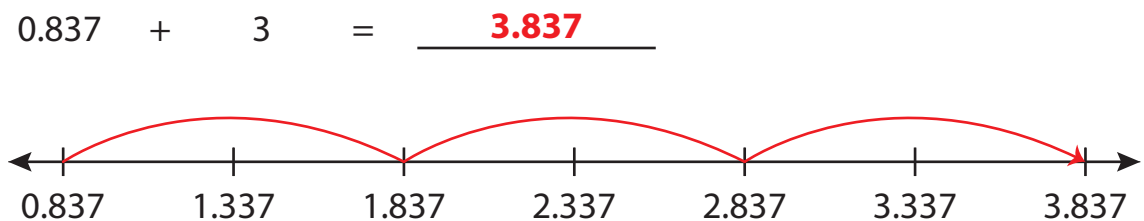
4) $7.366 + \quad = \quad$



5) $11.775 + \quad = \quad$



6) $0.837 + 3 = \underline{3.837}$



PREVIEW

Gain complete access to the largest collection of worksheets in all subjects!

Members, please log in to download this worksheet.

Not a member? Please sign up to gain complete access.

www.mathworksheets4kids.com