

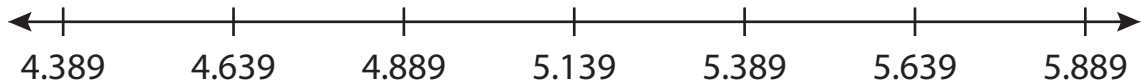
Name : _____

Number Line Addition

Hops-thousandth: S4

Indicate hops on each number line and complete the addition sentences.

1) $4.389 + 1.25 = \underline{\hspace{2cm}}$



2) $10 + 0.675 = \underline{\hspace{2cm}}$



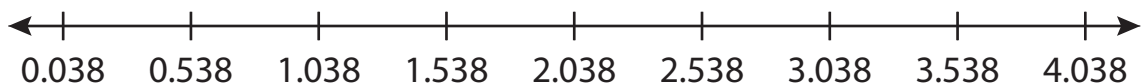
3) $12.247 + \underline{\hspace{1cm}} = \underline{\hspace{1cm}}$




4) $3.523 + \underline{\hspace{1cm}} = \underline{\hspace{1cm}}$



5) $0.538 + \underline{\hspace{1cm}} = \underline{\hspace{1cm}}$



6) $8.36 + 0.717 = \underline{\hspace{2cm}}$



PREVIEW

Gain complete access to the largest collection of worksheets in all subjects!

Members, please log in to download this worksheet.

Not a member? Please sign up to gain complete access.

www.mathworksheets4kids.com

Name : _____

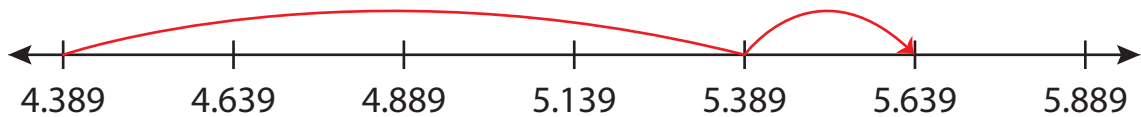
Answer key

Number Line Addition

Hops-thousandth: S4

Indicate hops on each number line and complete the addition sentences.

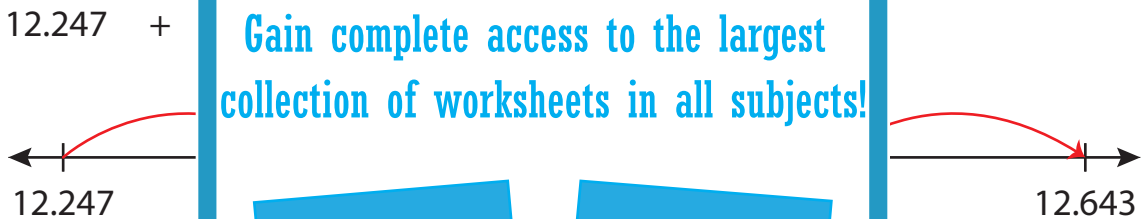
1) $4.389 + 1.25 = \underline{5.639}$



2) $10 + 0.675 = \underline{10.675}$



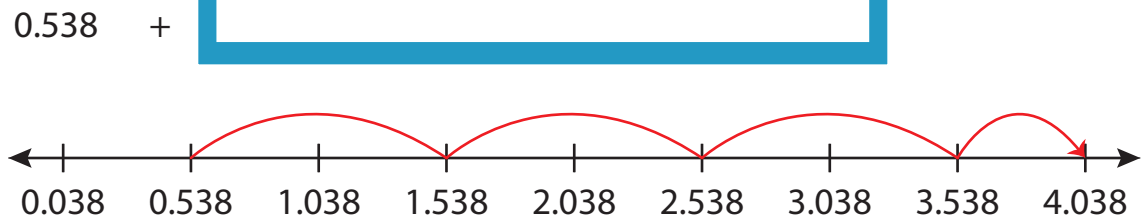
3) $12.247 +$




4) $3.523 +$



5) $0.538 +$



6) $8.36 + 0.717 = \underline{9.077}$



PREVIEW

Gain complete access to the largest collection of worksheets in all subjects!

Members, please log in to download this worksheet.

Not a member? Please sign up to gain complete access.

www.mathworksheets4kids.com