

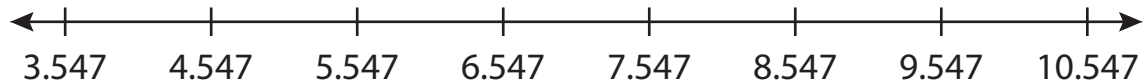
Name : \_\_\_\_\_

# Number Line Addition

Hops-thousandth: S5

Indicate hops on each number line and complete the addition sentences.

1)  $3.547 + 6 = \underline{\hspace{2cm}}$



2)  $0.478 + 2 = \underline{\hspace{2cm}}$




3)  $6.333 + 6 = \underline{\hspace{2cm}}$



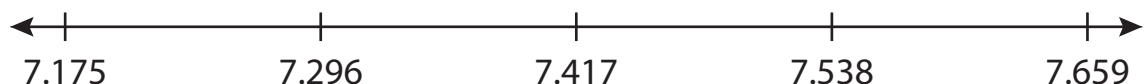
4)  $14.019 + 1.647 = \underline{\hspace{2cm}}$



5)  $1.224 + 1.250 = \underline{\hspace{2cm}}$



6)  $7.296 + 0.363 = \underline{\hspace{2cm}}$



**PREVIEW**

Gain complete access to the largest collection of worksheets in all subjects!

Members, please log in to download this worksheet.

Not a member? Please sign up to gain complete access.

[www.mathworksheets4kids.com](http://www.mathworksheets4kids.com)

Name : \_\_\_\_\_

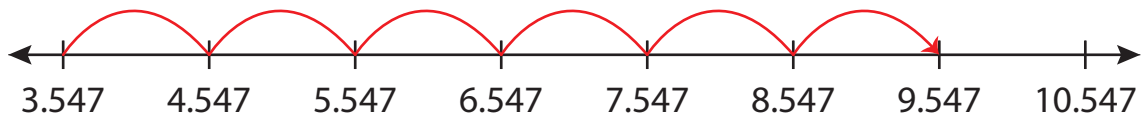
## Answer key

# Number Line Addition

Hops-thousandth: S5

Indicate hops on each number line and complete the addition sentences.

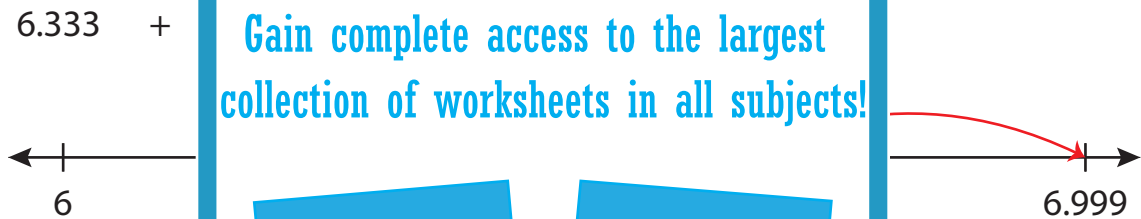
1)  $3.547 + 6 = \underline{9.547}$



2)  $0.478 + 3 = \underline{3.478}$



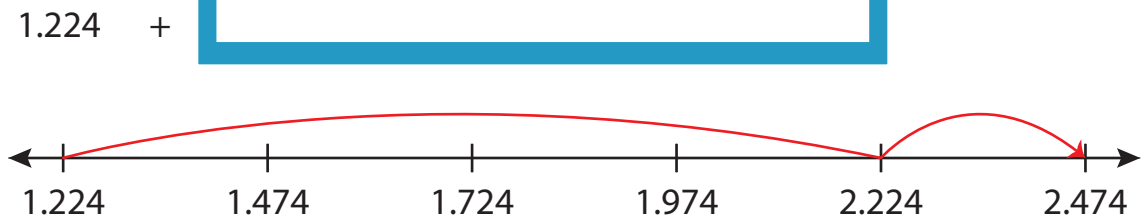
3)  $6.333 + 6 = \underline{6.999}$



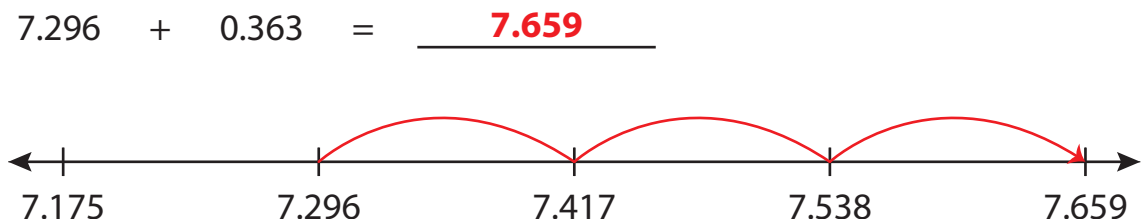
4)  $14.019 + 1.647 = \underline{15.667}$



5)  $1.224 + 1.248 = \underline{2.474}$



6)  $7.296 + 0.363 = \underline{7.659}$



# PREVIEW

Gain complete access to the largest collection of worksheets in all subjects!

Members, please log in to download this worksheet.

Not a member? Please sign up to gain complete access.

[www.mathworksheets4kids.com](http://www.mathworksheets4kids.com)