

Name : _____

Number Line Addition

3 addends-hundredth: S1

Indicate hops on each number line and complete the addition sentences.

1) $5.57 + 0.5 + 2 = \underline{\hspace{2cm}}$



2) $3.74 + 0.84 + 0.42 = \underline{\hspace{2cm}}$



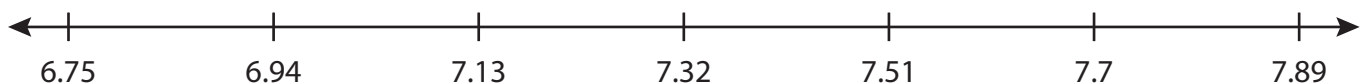
3) $16 + 1.25 + 1 = \underline{\hspace{2cm}}$



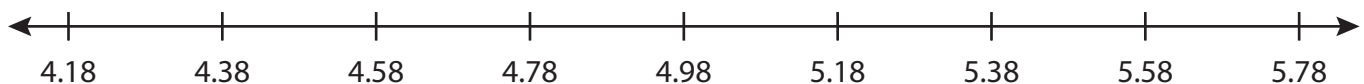
4) $9.36 + 2 + 1 = \underline{\hspace{2cm}}$



5) $6.94 + 0.19 + 0.77 = \underline{\hspace{2cm}}$



6) $4.18 + 1 + 0.4 = \underline{\hspace{2cm}}$



PREVIEW

Gain complete access to the largest collection of worksheets in all subjects!

Members, please log in to download this worksheet.

Not a member? Please sign up to gain complete access.

www.mathworksheets4kids.com

Name : _____

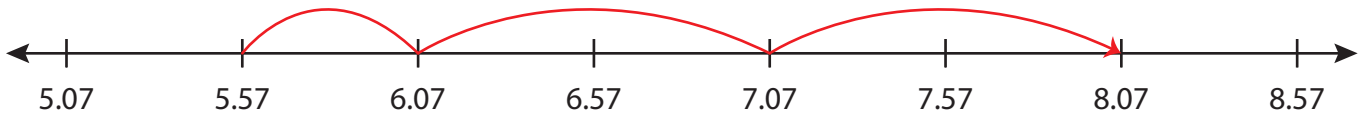
Answer key

Number Line Addition

3addends-hundredth: S1

Indicate hops on each number line and complete the addition sentences.

1) $5.57 + 0.5 + 2 = \underline{8.07}$



2) $3.74 + 0.84 + 0.42 = \underline{5}$



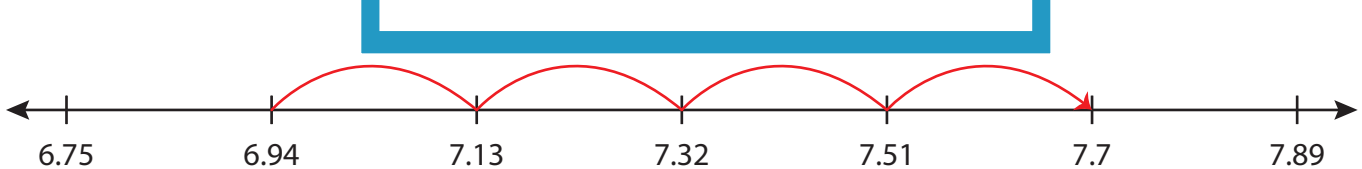
3) $16 + 1.25 + 1$



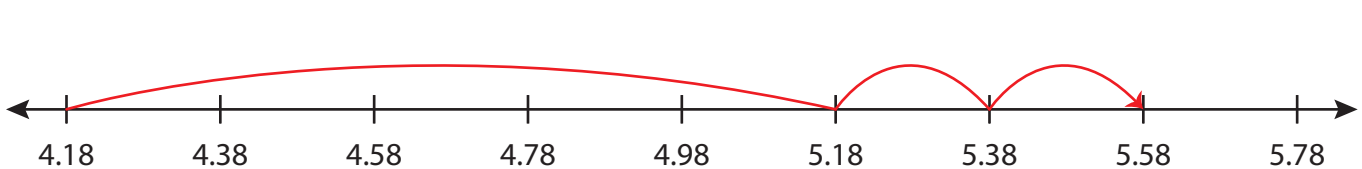
4) $9.36 + 2 + 1$



5) $6.94 + 0.19 + 0$



6) $4.18 + 1 + 0.4 = \underline{5.58}$



PREVIEW

Gain complete access to the largest collection of worksheets in all subjects!

Members, please log in to download this worksheet.

Not a member? Please sign up to gain complete access.

www.mathworksheets4kids.com