


Name : _____

Number Line Addition

3addends-hundredth: S2

Indicate hops on each number line and complete the addition sentences.

1) $12 + 1 + 0.75 = \underline{\hspace{2cm}}$



2) $6.19 + 2.5 + 1 = \underline{\hspace{2cm}}$



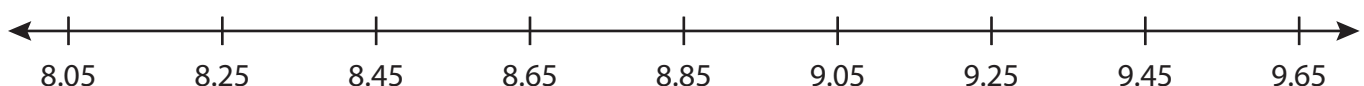
3) $2.57 + 3 + 1 = \underline{\hspace{2cm}}$



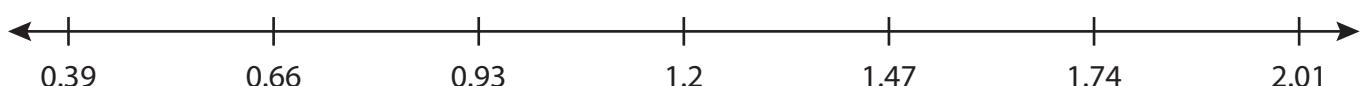
4) $3.32 + 0.34 + 0.68 = \underline{\hspace{2cm}}$



5) $8.25 + 1 + 0.2 = \underline{\hspace{2cm}}$



6) $0.39 + 0.54 + 0.27 = \underline{\hspace{2cm}}$



PREVIEW

Gain complete access to the largest collection of worksheets in all subjects!

Members, please log in to download this worksheet.

Not a member? Please sign up to gain complete access.

www.mathworksheets4kids.com

Name : _____

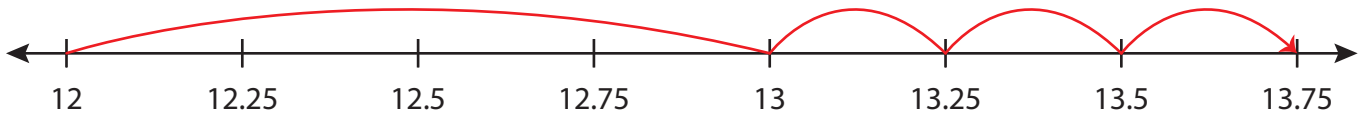
Answer key

Number Line Addition

3addends-hundredth: S2

Indicate hops on each number line and complete the addition sentences.

1) $12 + 1 + 0.75 = \underline{13.75}$



2) $6.19 + 2.5 + 1 = \underline{9.69}$



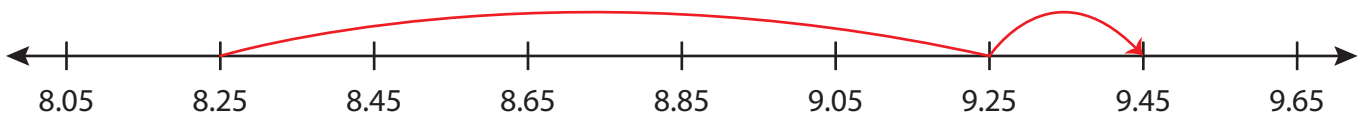
3) $2.57 + 3 + 1 = \underline{6.57}$



4) $3.32 + 0.34 + 0.68 = \underline{4.34}$



5) $8.25 + 1 + 0.2 = \underline{9.45}$



6) $0.39 + 0.54 + 0.27 = \underline{1.2}$



PREVIEW

Gain complete access to the largest collection of worksheets in all subjects!

Members, please log in to download this worksheet.

Not a member? Please sign up to gain complete access.

www.mathworksheets4kids.com