

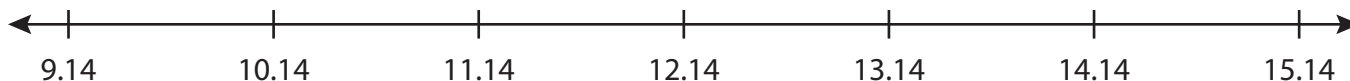
Name : \_\_\_\_\_

## Number Line Addition

3 addends-hundredth: S3

Indicate hops on each number line and complete the addition sentences.

1)  $9.14 + 2 + 3 = \underline{\hspace{2cm}}$



2)  $2 + 1 + 0.5 = \underline{\hspace{2cm}}$



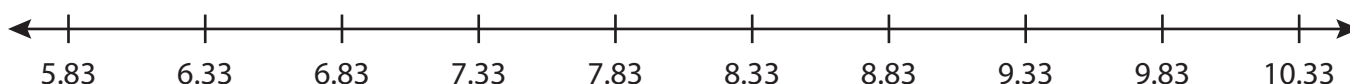
3)  $7.1 + 0.14 + 0.07 = \underline{\hspace{2cm}}$




4)  $3.27 + 1 + 0.6 = \underline{\hspace{2cm}}$



5)  $6.33 + 2.5 + 1.17 = \underline{\hspace{2cm}}$



6)  $11 + 0.18 + 0.54 = \underline{\hspace{2cm}}$



# PREVIEW

Gain complete access to the largest collection of worksheets in all subjects!

Members, please log in to download this worksheet.

Not a member? Please sign up to gain complete access.

[www.mathworksheets4kids.com](http://www.mathworksheets4kids.com)

Name : \_\_\_\_\_

## Answer key

### Number Line Addition

3addends-hundredth: S3

Indicate hops on each number line and complete the addition sentences.

1)  $9.14 + 2 + 3 = \underline{14.14}$



2)  $2 + 1 + 0.5 = \underline{3.5}$



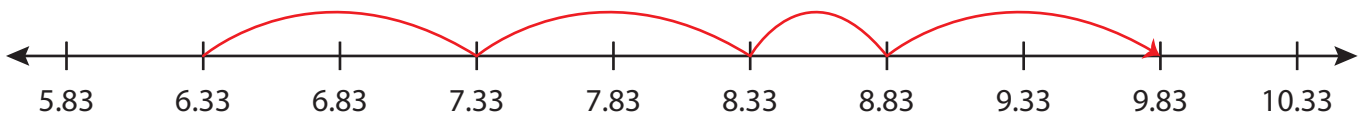
3)  $7.1 + 0.14 + 0.07 = \underline{7.31}$



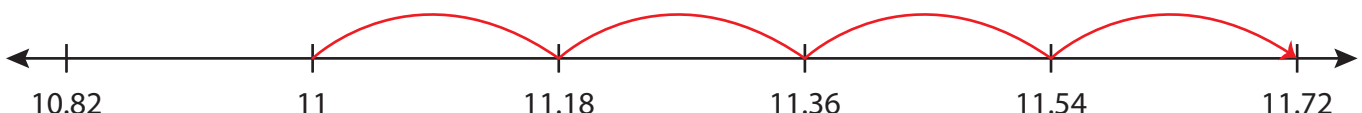
4)  $3.27 + 1 + 0.6 = \underline{4.87}$



5)  $6.33 + 2.5 + 1.16 = \underline{9.99}$



6)  $11 + 0.18 + 0.54 = \underline{11.72}$



**PREVIEW**

Gain complete access to the largest collection of worksheets in all subjects!

Members, please log in to download this worksheet.

Not a member? Please sign up to gain complete access.

[www.mathworksheets4kids.com](http://www.mathworksheets4kids.com)