

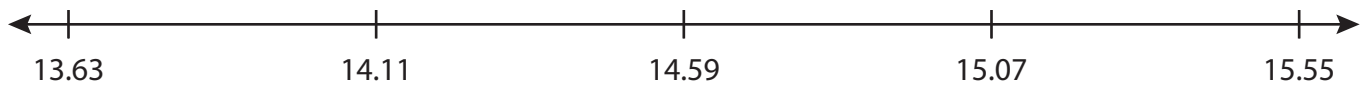
Name : _____

Number Line Addition

3 addends-hundredth: 54

Indicate hops on each number line and complete the addition sentences.

1) $14.11 + 0.48 + 0.48 =$ _____



2) $10.64 + 5 + 1 =$ _____




3) $6.28 + 0.2 + 0.6 =$ _____



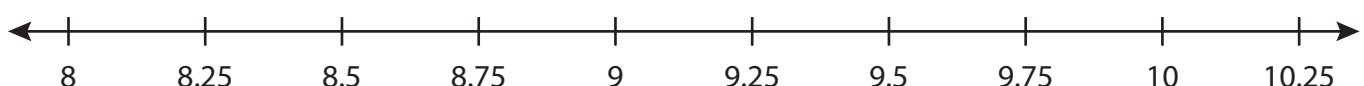
4) $4.09 + 0.5 + 2 =$ _____



5) $1.25 + 0.39 + 0.5 =$ _____



6) $8 + 1.75 + 0.25 =$ _____



PREVIEW

Gain complete access to the largest collection of worksheets in all subjects!

Members, please log in to download this worksheet.

Not a member? Please sign up to gain complete access.

www.mathworksheets4kids.com

Name : _____

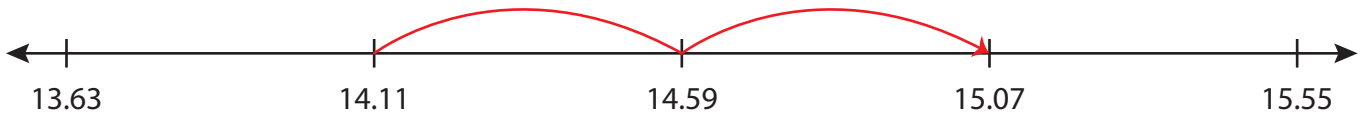
Answer key

Number Line Addition

3addends-hundredth: 54

Indicate hops on each number line and complete the addition sentences.

1) $14.11 + 0.48 + 0.48 = \underline{15.07}$



2) $10.64 + 5 + 1 = \underline{16.64}$



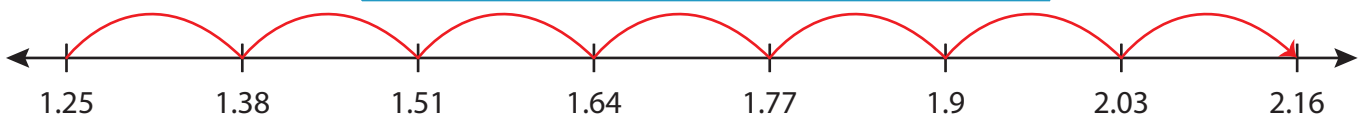
3) $6.28 + 0.2 + 0.6$



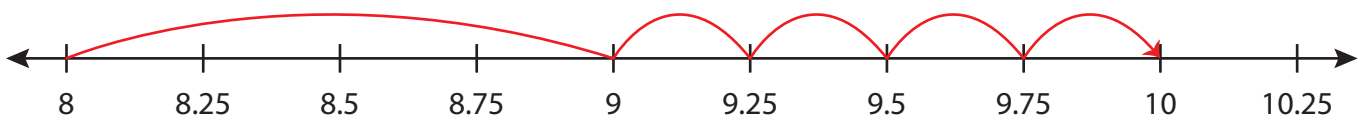
4) $4.09 + 0.5 + 2$



5) $1.25 + 0.39 + 0.5$



6) $8 + 1.75 + 0.25 = \underline{10}$



PREVIEW

Gain complete access to the largest collection of worksheets in all subjects!

Members, please log in to download this worksheet.

Not a member? Please sign up to gain complete access.

www.mathworksheets4kids.com