


Name : _____

Number Line Addition

3addends-hundredth: S5

Indicate hops on each number line and complete the addition sentences.

1) $2.14 + 0.4 + 0.2 = \underline{\hspace{2cm}}$



2) $16.27 + 0.18 + 0.27 = \underline{\hspace{2cm}}$




3) $3.68 + 2 + 1.5 = \underline{\hspace{2cm}}$




4) $7.92 + 0.42 + 0.42 = \underline{\hspace{2cm}}$



5) $5 + 0.5 + 1 = \underline{\hspace{2cm}}$



6) $0.33 + 3 + 2 = \underline{\hspace{2cm}}$



PREVIEW

Gain complete access to the largest collection of worksheets in all subjects!

Members, please log in to download this worksheet.

Not a member? Please sign up to gain complete access.

www.mathworksheets4kids.com

Name : _____

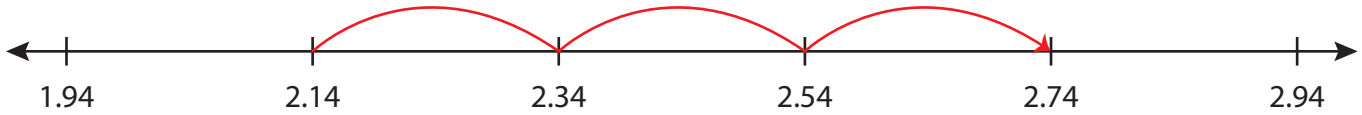
Answer key

Number Line Addition

3addends-hundredth: S5

Indicate hops on each number line and complete the addition sentences.

1) $2.14 + 0.4 + 0.2 = \underline{2.74}$



2) $16.27 + 0.18 + 0.27 = \underline{16.72}$



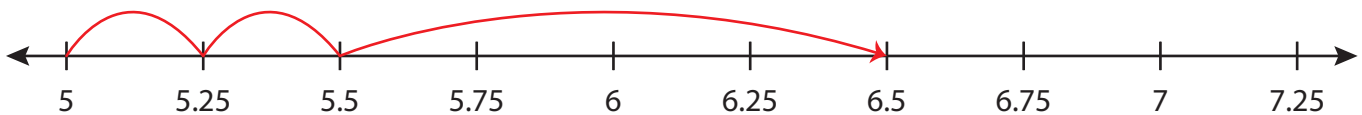
3) $3.68 + 2 + 1.5$



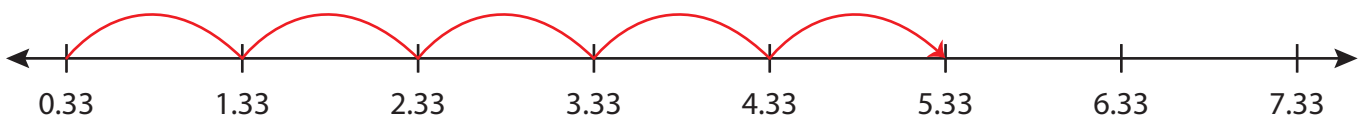
4) $7.92 + 0.42 + 0.42$



5) $5 + 0.5 + 1$



6) $0.33 + 3 + 2 = \underline{5.33}$



PREVIEW

Gain complete access to the largest collection of worksheets in all subjects!

Members, please log in to download this worksheet.

Not a member? Please sign up to gain complete access.

www.mathworksheets4kids.com