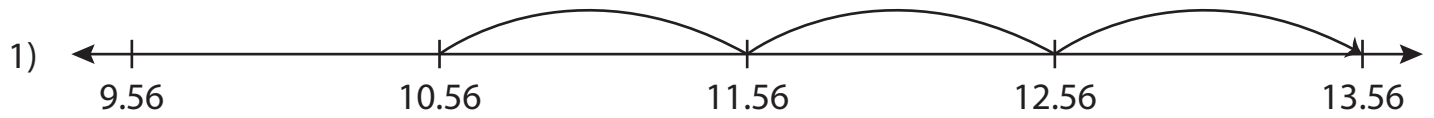


Name : \_\_\_\_\_

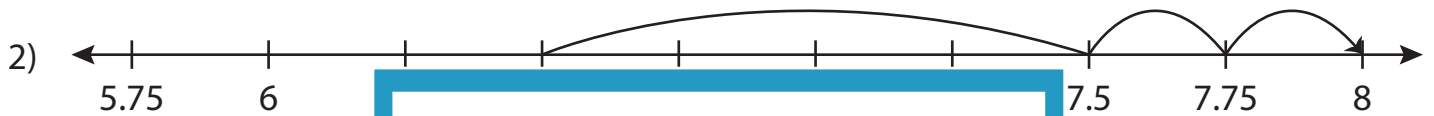
## Addition Sentence - Missing Numbers

3addends-hundredth: S3

Complete the addition sentence that describes each model.



$$10.56 + 1 + \underline{\quad\quad} = 13.56$$



6.5

# PREVIEW

8



3.24

Gain complete access to the largest collection of worksheets in all subjects!

3.36

3.4



6.04

6.54

4

9.54

10.04

6.54

9.04



4.51

4.71

4.91

5.11

5.31

5.51

5.71

5.91

$$\underline{\quad\quad} + 0.4 + 1 = 5.91$$



7

7.19

7.38

7.57

7.76

7.95

$$7 + \underline{\quad\quad} + 0.19 = 7.57$$

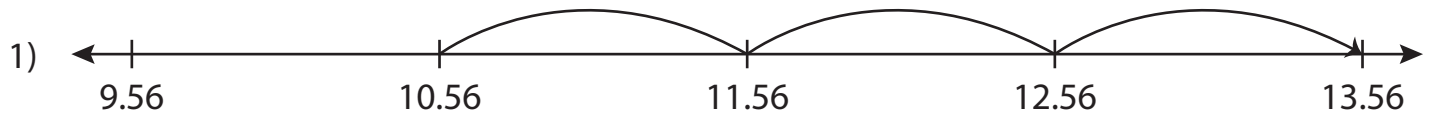
Name : \_\_\_\_\_

## Answer key

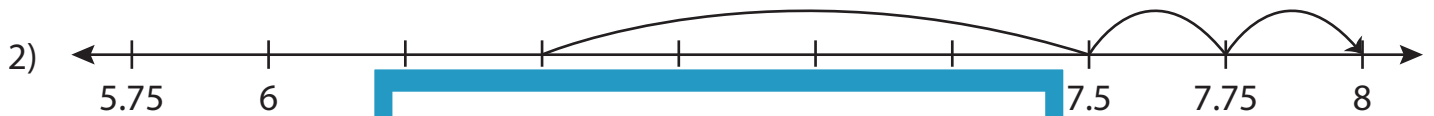
### Addition Sentence - Missing Numbers

3addends-hundredth: S3

Complete the addition sentence that describes each model.



$$10.56 + 1 + \underline{2} = 13.56$$



6.5

# PREVIEW

8



3.24

Gain complete access to the largest collection of worksheets in all subjects!

3.36

3.4

3.4



6.04

6.54

4

9.54

10.04

6.54

9.04



4.51

4.71

4.91

5.11

5.31

5.51

5.71

5.91

4.51

+

0.4

+

1

=

5.91



7

7.19

7.38

7.57

7.76

7.95

7

+

0.38

+

0.19

=

7.57