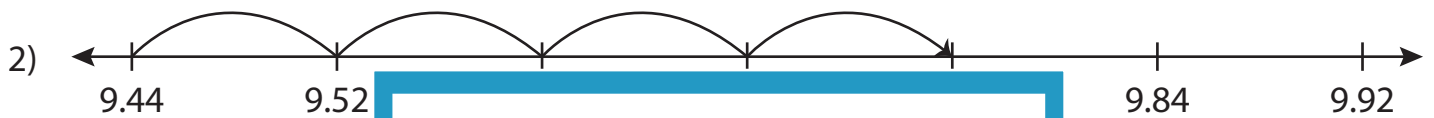
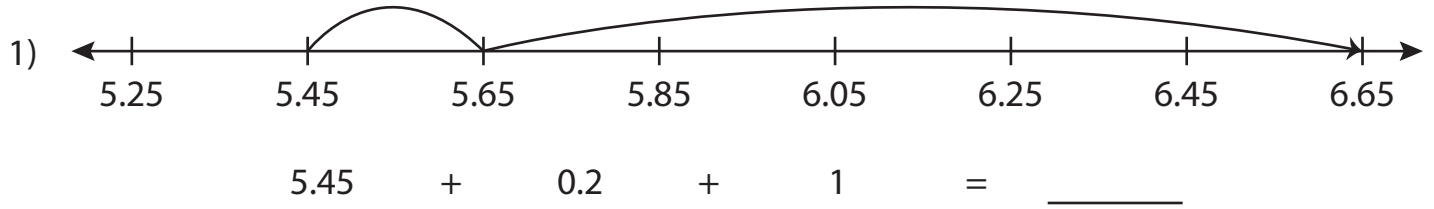


Name : _____

Addition Sentence - Missing Numbers

3addends-hundredth: S4

Complete the addition sentence that describes each model.



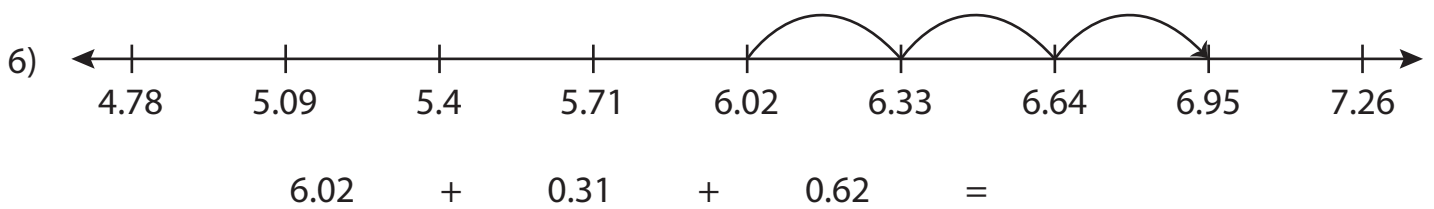
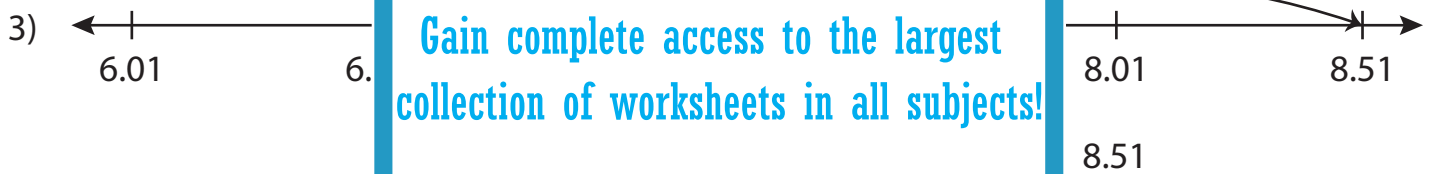
PREVIEW

Gain complete access to the largest collection of worksheets in all subjects!

Members, please log in to download this worksheet.

Not a member? Please sign up to gain complete access.

www.mathworksheets4kids.com



Name : _____

Answer key

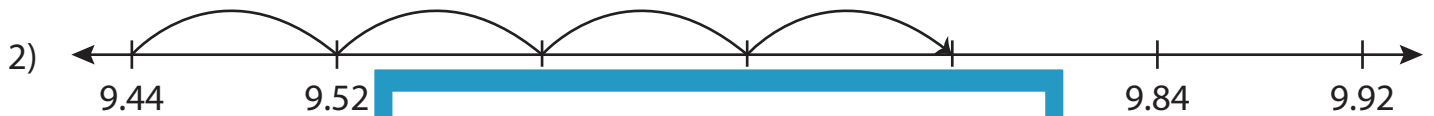
Addition Sentence - Missing Numbers

3addends-hundredth: S4

Complete the addition sentence that describes each model.



$$5.45 + 0.2 + 1 = \underline{6.65}$$



9.44

PREVIEW

9.76



7.01

Gain complete access to the largest collection of worksheets in all subjects!

Members, please log in to download this worksheet.

Not a member? Please sign up to gain complete access.

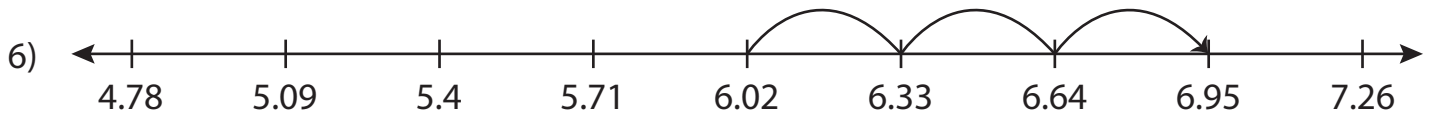
www.mathworksheets4kids.com



3.29



$$3 + 2 + \underline{0.25} = 5.25$$



$$6.02 + 0.31 + 0.62 = \underline{6.95}$$