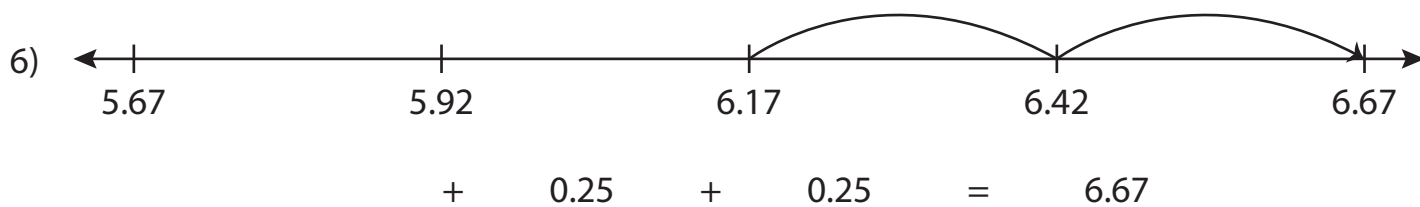
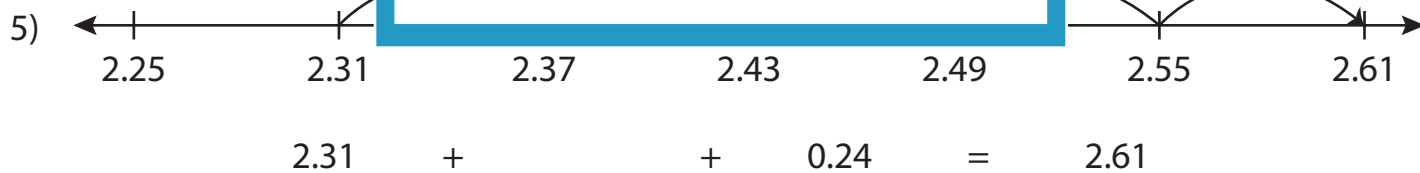
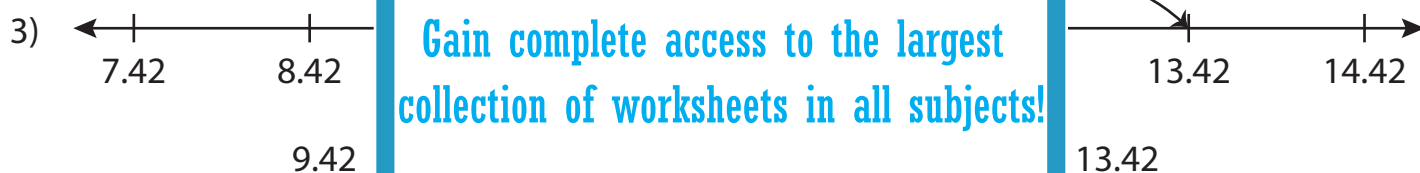
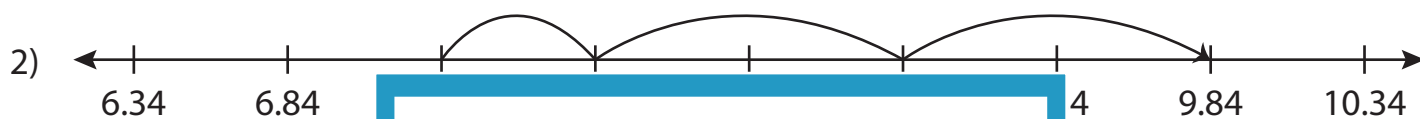
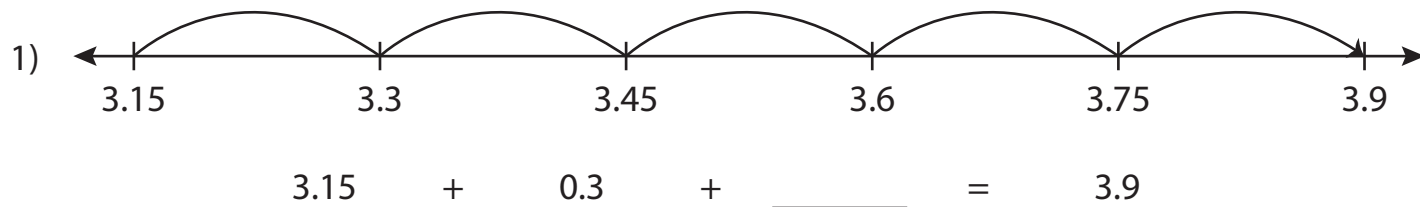


Name : _____

Addition Sentence - Missing Numbers

3addends-hundredth: S5

Complete the addition sentence that describes each model.



PREVIEW

Gain complete access to the largest collection of worksheets in all subjects!

Members, please log in to download this worksheet.

Not a member? Please sign up to gain complete access.

www.mathworksheets4kids.com

Name : _____

Answer key

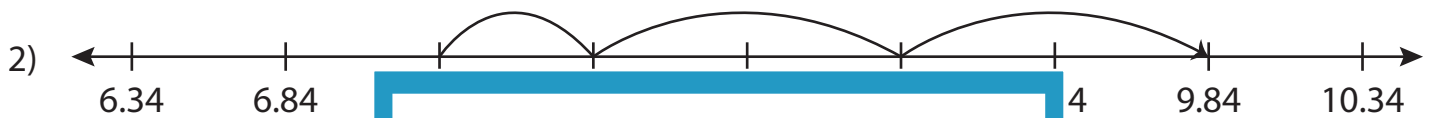
Addition Sentence - Missing Numbers

3addends-hundredth: S5

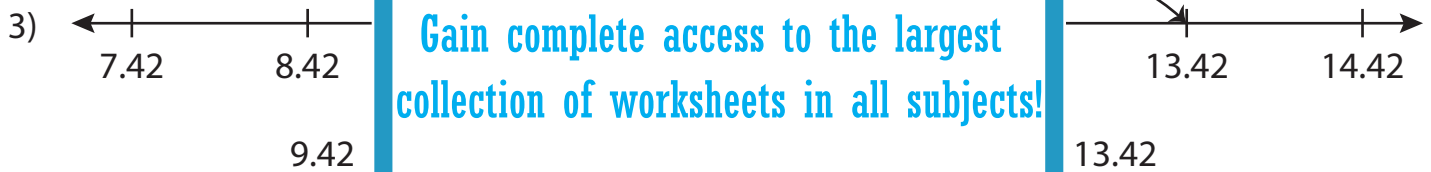
Complete the addition sentence that describes each model.



$$3.15 + 0.3 + \underline{0.45} = 3.9$$



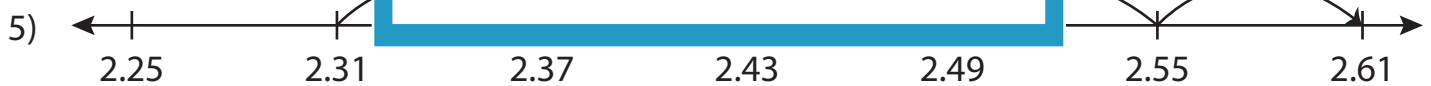
$$7.34 + \underline{9.84} = 10.34$$



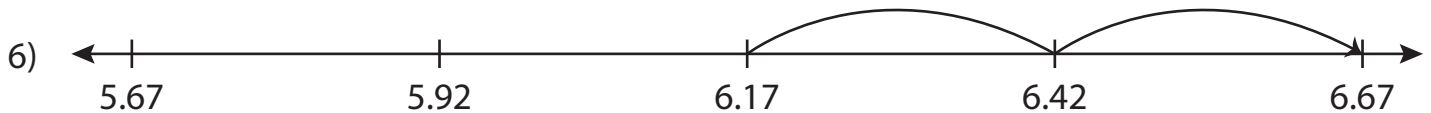
$$9.42 + \underline{13.42} = 14.42$$



$$4 + \underline{4.69} = 6.07$$



$$2.31 + \underline{0.06} + 0.24 = 2.61$$



$$\underline{6.17} + 0.25 + 0.25 = 6.67$$

PREVIEW

Gain complete access to the largest collection of worksheets in all subjects!

Members, please log in to download this worksheet.

Not a member? Please sign up to gain complete access.

www.mathworksheets4kids.com