

Name : _____

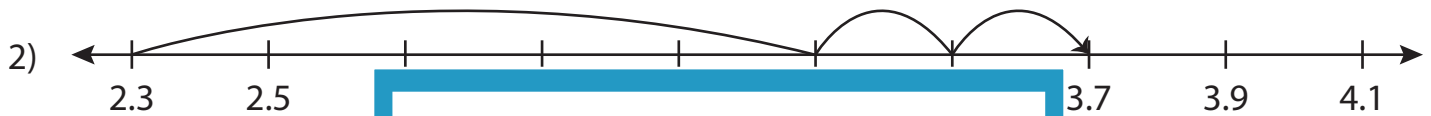
Addition Sentence - Missing Numbers

3 addends-tenth: S4

Complete the addition sentence that describes each model.



$$10.9 + 0.6 + 0.3 = \underline{\hspace{2cm}}$$



2.3

PREVIEW

3.7



11.5

Gain complete access to the largest collection of worksheets in all subjects!

14.5

15.5



5.5

Members, please log in to download this worksheet.

Not a member? Please sign up to gain complete access.

6

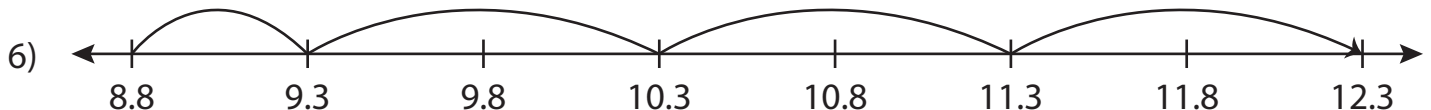
6.1

6.2



6

$$6 + \underline{\hspace{2cm}} + 0.4 = 7.2$$



$$\underline{\hspace{2cm}} + 0.5 + 3 = 12.3$$

Name : _____

Answer key

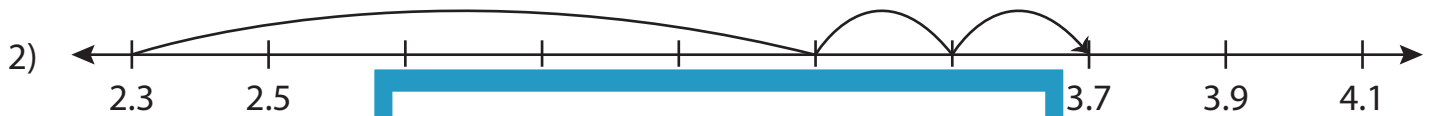
Addition Sentence - Missing Numbers

3 addends-tenth: S4

Complete the addition sentence that describes each model.



$$10.9 + 0.6 + 0.3 = \underline{11.8}$$



2.3

PREVIEW

3.7



11.5

Gain complete access to the largest collection of worksheets in all subjects!

14.5

15.5



5.5

Members, please log in to download this worksheet.

Not a member? Please sign up to gain complete access.

6

6.1

6.2

6

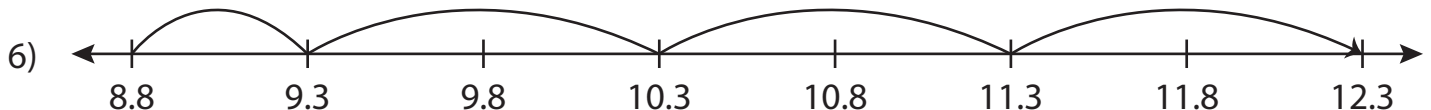


6

0.8

0.4

7.2



8.8

0.5

3

12.3