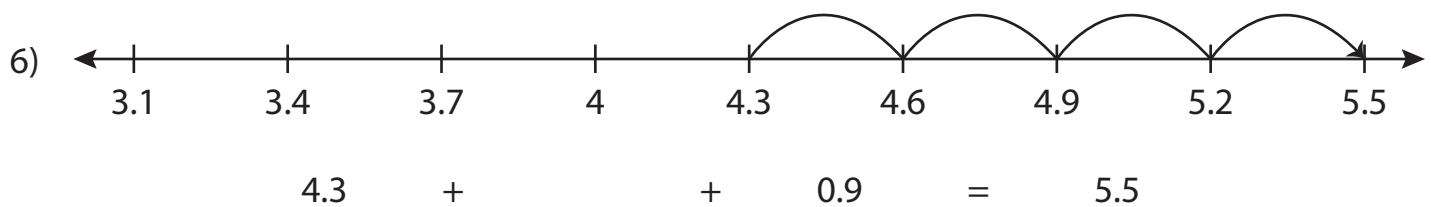
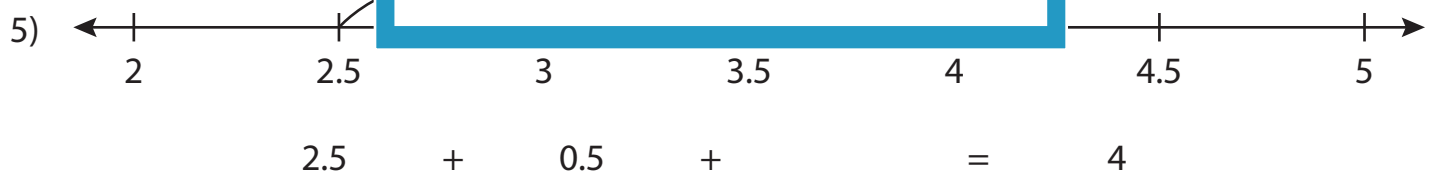
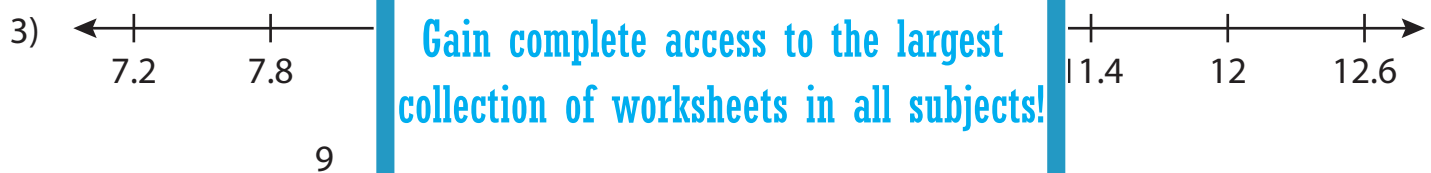

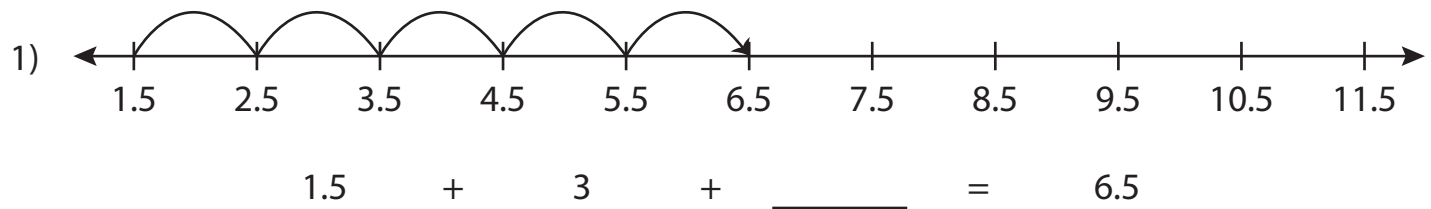


Name : _____

Addition Sentence - Missing Numbers

3 addends-tenth: S5

Complete the addition sentence that describes each model.



PREVIEW

Gain complete access to the largest collection of worksheets in all subjects!

Members, please log in to download this worksheet.

Not a member? Please sign up to gain complete access.

www.mathworksheets4kids.com

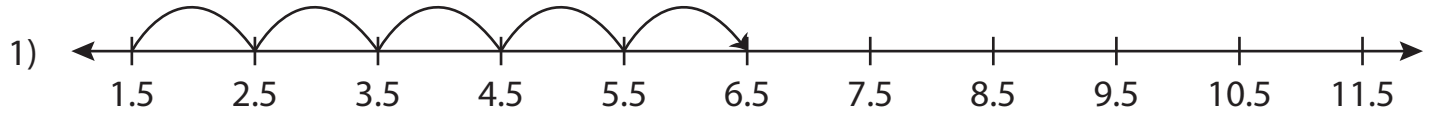
Name : _____

Answer key

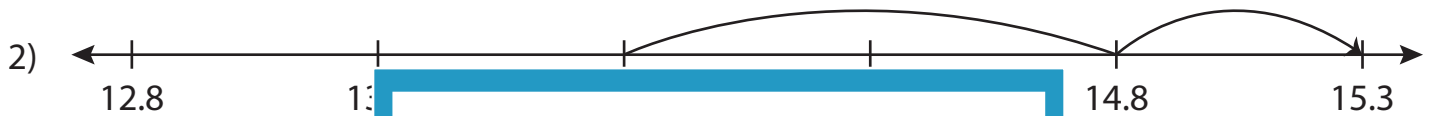
Addition Sentence - Missing Numbers

3addends-tenth: S5

Complete the addition sentence that describes each model.



$$1.5 + 3 + \underline{2} = 6.5$$



13.8

14.8

15.3

15.3



7.2

7.8

11.4

12

12.6

9

10.2



8.3

8.5

9.5

9.7

8.3

9.7



2

2.5

3

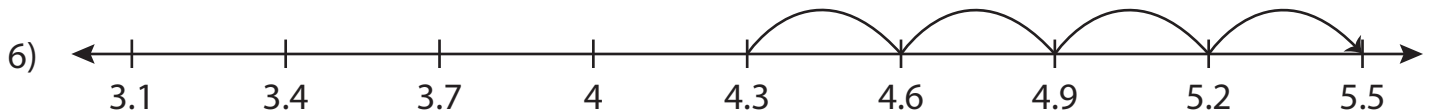
3.5

4

4.5

5

$$2.5 + 0.5 + \underline{1} = 4$$



3.1

3.4

3.7

4

4.3

4.6

4.9

5.2

5.5

$$4.3 + \underline{0.3} + 0.9 = 5.5$$

PREVIEW

Gain complete access to the largest collection of worksheets in all subjects!

Members, please log in to download this worksheet.

Not a member? Please sign up to gain complete access.

www.mathworksheets4kids.com