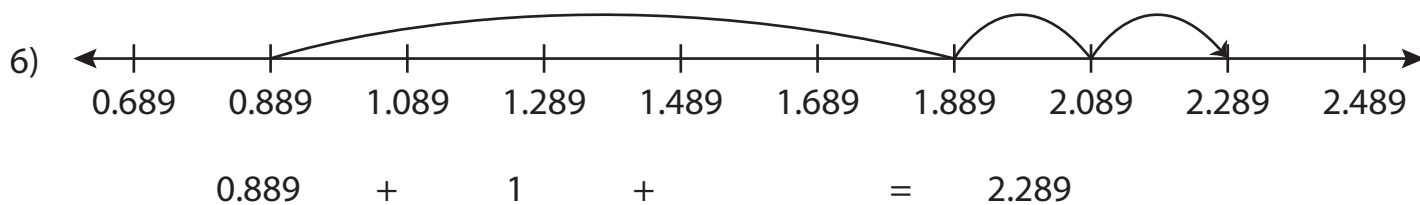
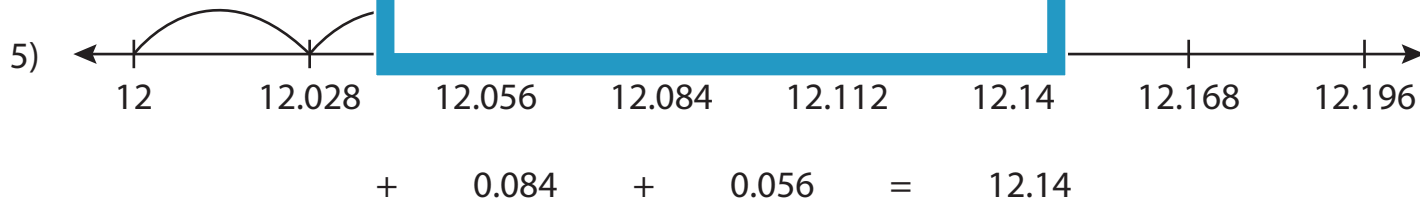
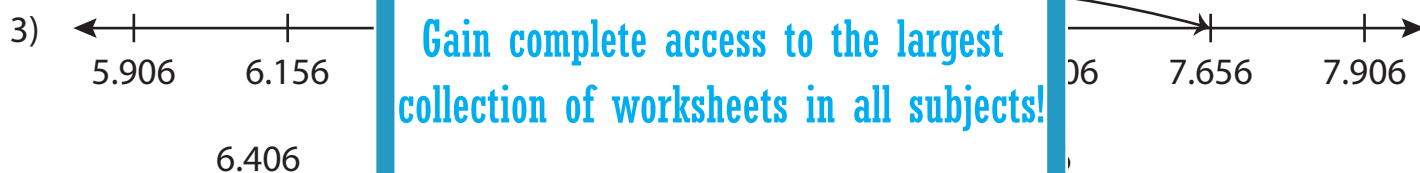
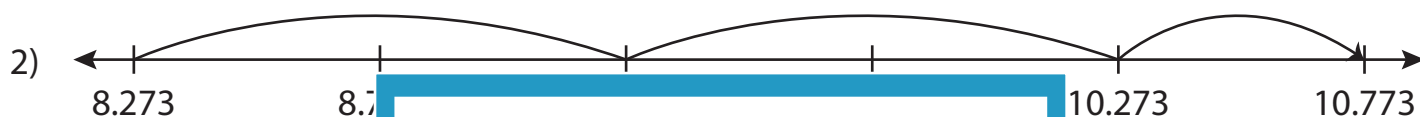
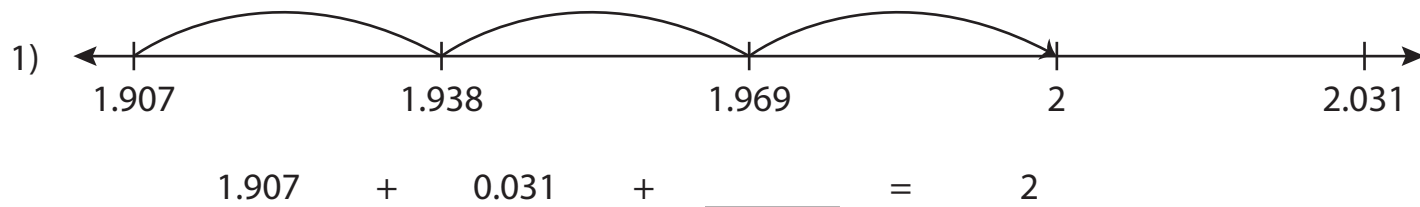


Name : \_\_\_\_\_

## Addition Sentence - Missing Numbers

3 addends - thousandth: S2

Complete the addition sentence that describes each model.



**PREVIEW**

Gain complete access to the largest collection of worksheets in all subjects!

Members, please log in to download this worksheet.

Not a member? Please sign up to gain complete access.

[www.mathworksheets4kids.com](http://www.mathworksheets4kids.com)

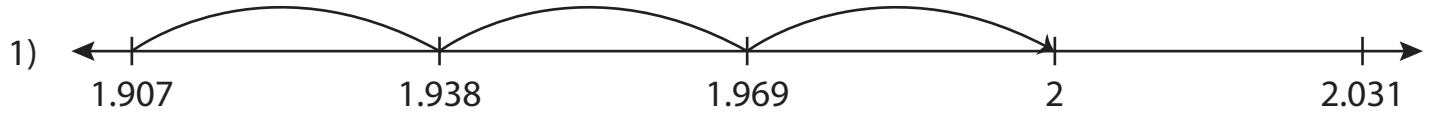
Name : \_\_\_\_\_

## Answer key

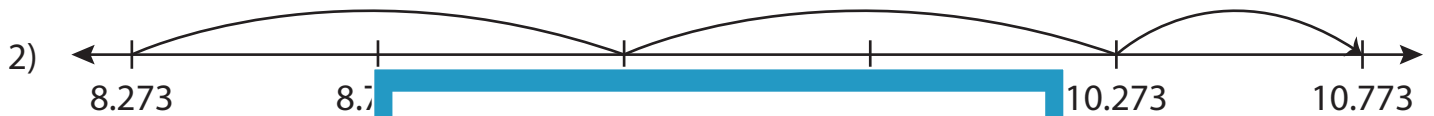
### Addition Sentence - Missing Numbers

3addends-thousandth: S2

Complete the addition sentence that describes each model.



$$1.907 + 0.031 + \underline{0.062} = 2$$



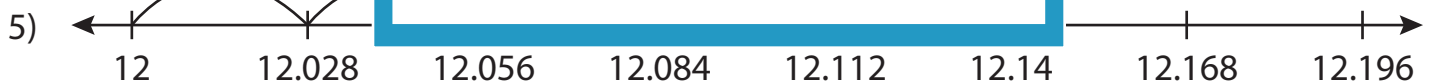
8.273



6.406

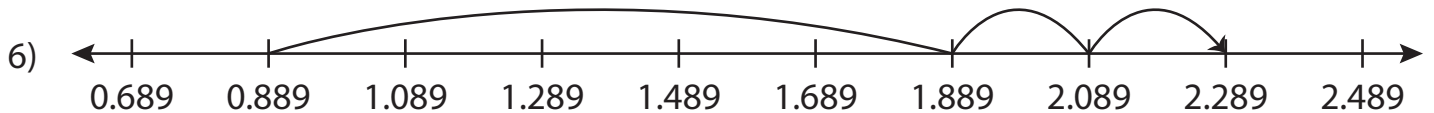


7.032



12

$$+ 0.084 + 0.056 = 12.14$$



$$0.889 + 1 + \underline{0.4} = 2.289$$

**PREVIEW**

Gain complete access to the largest collection of worksheets in all subjects!

Members, please log in to download this worksheet.

Not a member? Please sign up to gain complete access.

[www.mathworksheets4kids.com](http://www.mathworksheets4kids.com)