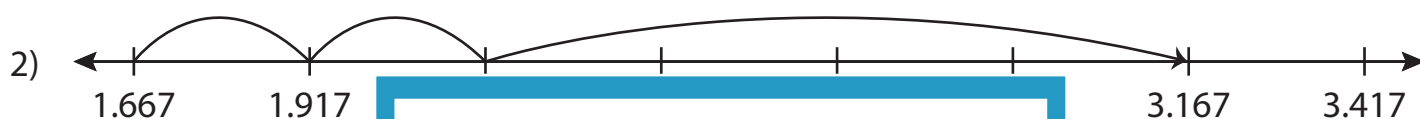
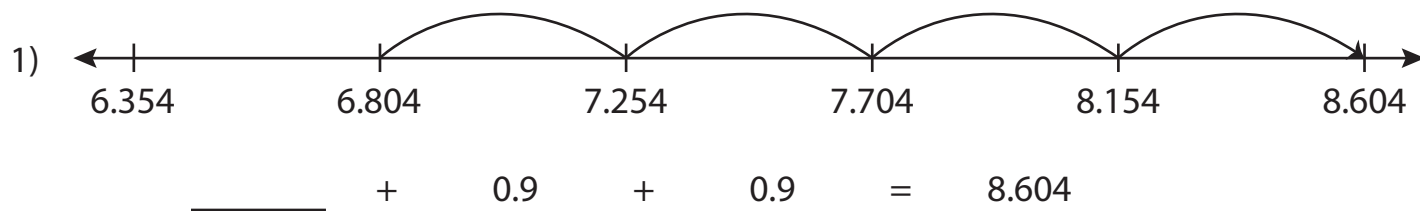


Name : \_\_\_\_\_

## Addition Sentence - Missing Numbers

3addends-thousandth: S4

Complete the addition sentence that describes each model.



1.667

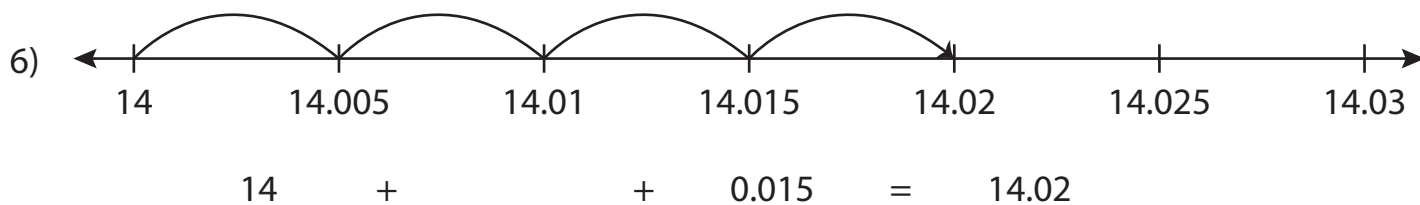
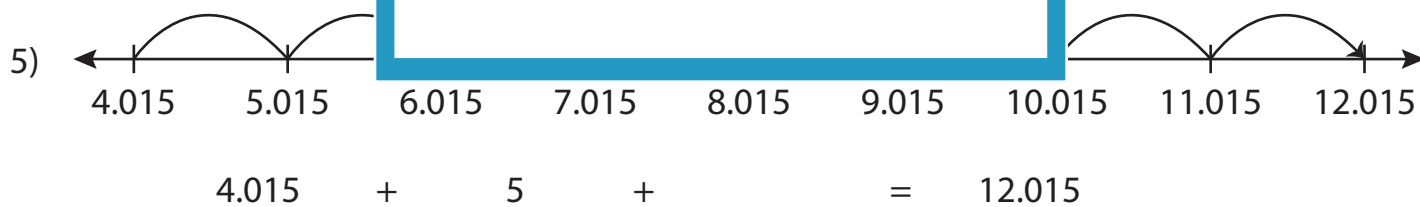
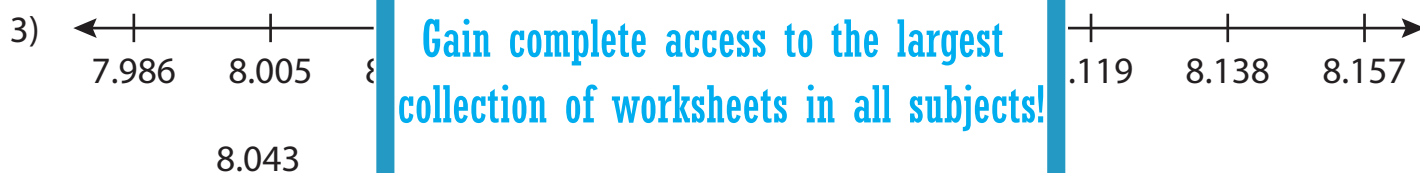
# PREVIEW

Gain complete access to the largest collection of worksheets in all subjects!

Members, please log in to download this worksheet.

Not a member? Please sign up to gain complete access.

[www.mathworksheets4kids.com](http://www.mathworksheets4kids.com)



Name : \_\_\_\_\_

## Answer key

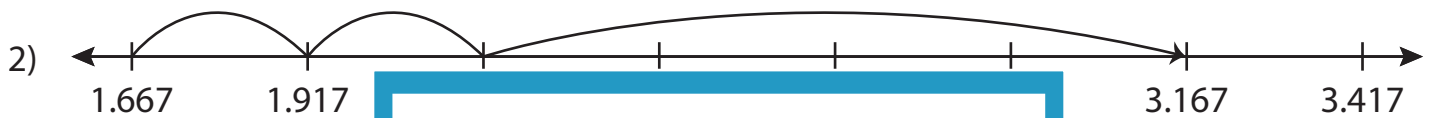
### Addition Sentence - Missing Numbers

3addends-thousandth: S4

Complete the addition sentence that describes each model.



$$\underline{6.804} + 0.9 + 0.9 = 8.604$$



1.667

# PREVIEW

Gain complete access to the largest collection of worksheets in all subjects!

Members, please log in to download this worksheet.

Not a member? Please sign up to gain complete access.

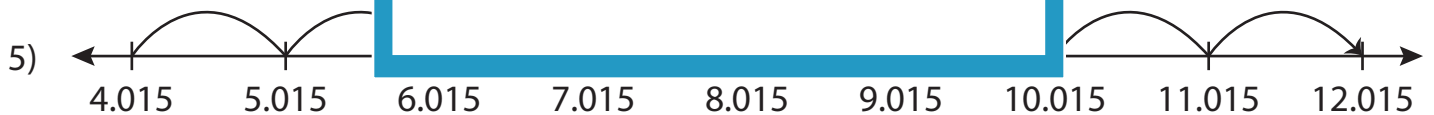
[www.mathworksheets4kids.com](http://www.mathworksheets4kids.com)



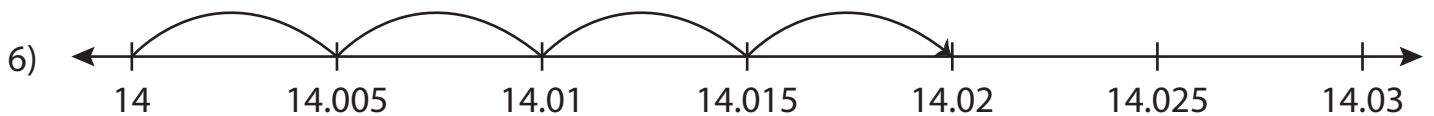
8.043



2.659



$$4.015 + 5 + \underline{3} = 12.015$$



$$14 + \underline{0.005} + 0.015 = 14.02$$