

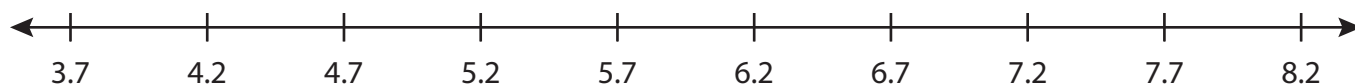
Name : _____

Number Line Addition

3 adds-tenth: S1

Indicate hops on each number line and complete the addition sentences.

1) $3.7 + 2 + 1.5 =$ _____



2) $8.2 + 0.4 + 0.2 =$ _____



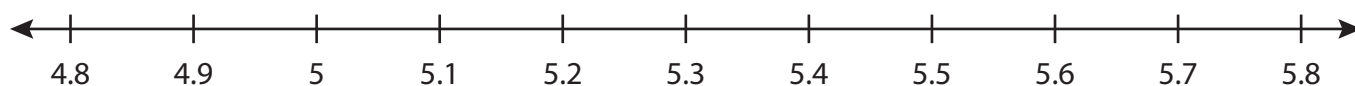
3) $17.5 + 1 + 0.5 =$ _____



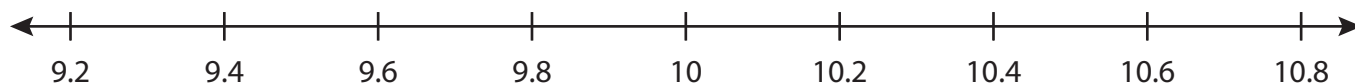
4) $6.9 + 3 + 1 =$ _____



5) $5 + 0.1 + 0.4 =$ _____



6) $9.4 + 0.2 + 1 =$ _____



PREVIEW

Gain complete access to the largest collection of worksheets in all subjects!

Members, please log in to download this worksheet.

Not a member? Please sign up to gain complete access.

www.mathworksheets4kids.com

Name : _____

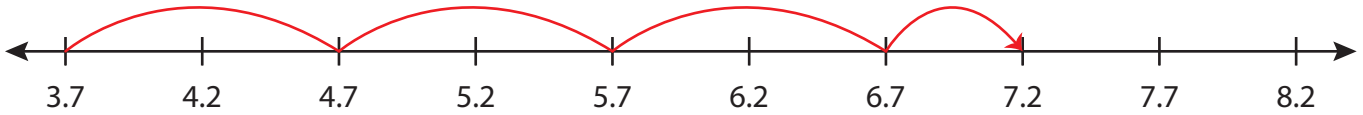
Answer key

Number Line Addition

3adds-tenth: S1

Indicate hops on each number line and complete the addition sentences.

1) $3.7 + 2 + 1.5 = \underline{7.2}$



2) $8.2 + 0.4 + 0.2 = \underline{8.8}$



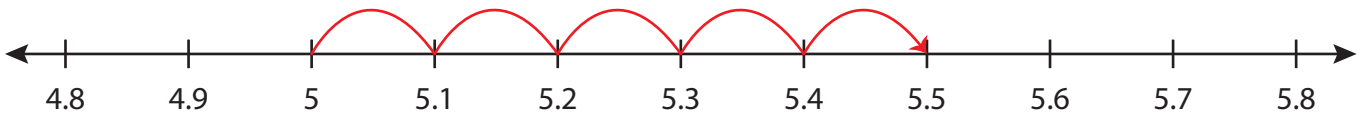
3) $17.5 + 1 + 0.5 =$



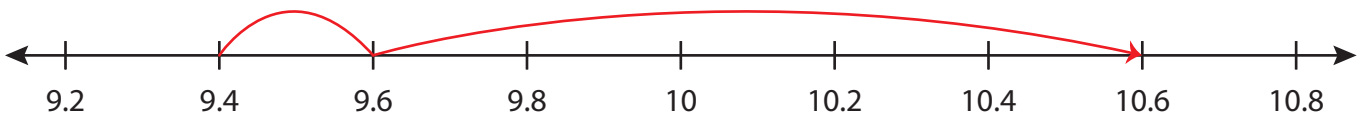
4) $6.9 + 3 + 1 =$



5) $5 + 0.1 + 0.4 =$



6) $9.4 + 0.2 + 1 = \underline{10.6}$



PREVIEW

Gain complete access to the largest collection of worksheets in all subjects!

Members, please log in to download this worksheet.

Not a member? Please sign up to gain complete access.

www.mathworksheets4kids.com